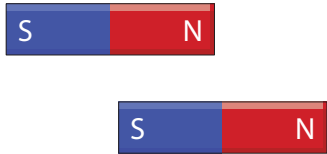


Name : \_\_\_\_\_

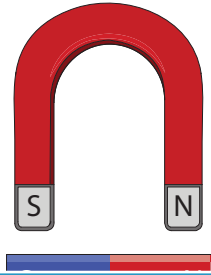
# Attract or Repel?

Look at each pair of magnets. Write whether they attract or repel.


1)




2)



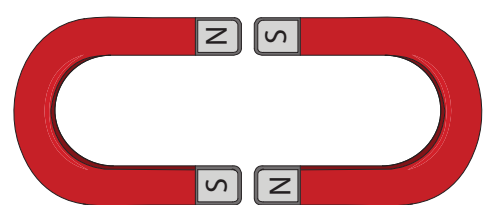
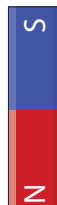
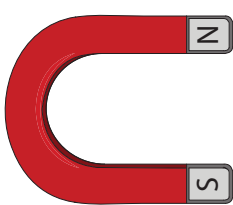
3)



4)



7)



**PREVIEW**

Gain complete access to the largest collection of worksheets in all subjects!

Members, please log in to download this worksheet.

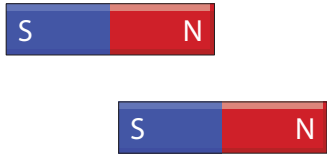
Not a member? Please sign up to gain complete access.

[www.mathworksheets4kids.com](http://www.mathworksheets4kids.com)

# Attract or Repel?


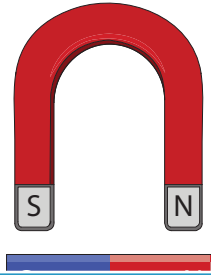
Look at each pair of magnets. Write whether they attract or repel.

1)



**attract**


2)



**attract**

3)

4)




**attract**

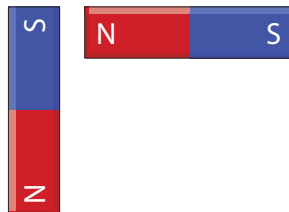


**repel**

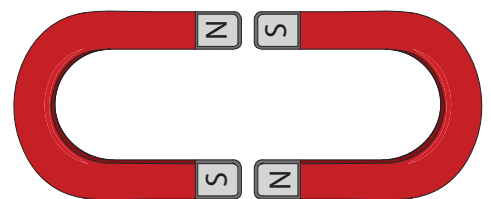
7)



**repel**



**attract**



**attract**

## PREVIEW

Gain complete access to the largest collection of worksheets in all subjects!

Members, please log in to download this worksheet.

Not a member? Please sign up to gain complete access.

www.mathworksheets4kids.com