






Name : \_\_\_\_\_

# Magnetic Experiments

Predict if the coins are magnetic or not. Test the coins with a magnet. Record and compare the results.

Coin	Prediction		Result	
	Yes	No	Yes	No
 <p>Penny</p>				
 <p>Nickel</p>				
 <p>Dime</p>				
 <p>Quarter</p>				
 <p>Half-dollar</p>				

**PREVIEW**

Access the largest collection of worksheets for just **\$19.95** per year!

Members, please log in to download this worksheet.

**Log in**

Not a member? Please sign up to gain complete access.

**Sign up**






[www.mathworksheets4kids.com](http://www.mathworksheets4kids.com)

Name : \_\_\_\_\_

**Answer key**

# Magnetic Experiments

Predict if the coins are magnetic or not. Test the coins with a magnet. Record and compare the results.

Coin	Prediction		Result	
	Yes	No	Yes	No
 Penny				✓
 Nickel				✓
 Dime				✓
 Quarter				✓
 Half-dollar				✓

## PREVIEW

Access the largest collection of worksheets for just **\$19.95** per year!

Members, please log in to download this worksheet.
 

Log in

Not a member? Please sign up to gain complete access.
 

Sign up

[www.mathworksheets4kids.com](http://www.mathworksheets4kids.com)