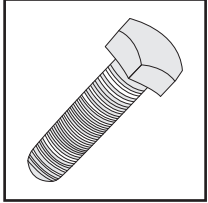


Name : \_\_\_\_\_

# Magnetic or Non-Magnetic?

Are the objects magnetic or non-magnetic?



\_\_\_\_\_



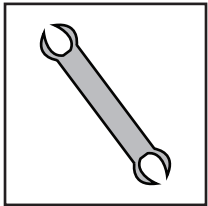
\_\_\_\_\_



\_\_\_\_\_



\_\_\_\_\_



\_\_\_\_\_

**PREVIEW**


Gain complete access to the largest collection of worksheets in all subjects!

Members, please log in to download this worksheet.

Not a member? Please sign up to gain complete access.


[www.mathworksheets4kids.com](http://www.mathworksheets4kids.com)

\_\_\_\_\_

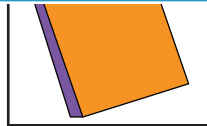


\_\_\_\_\_


\_\_\_\_\_



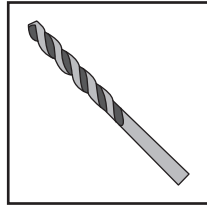
\_\_\_\_\_



\_\_\_\_\_



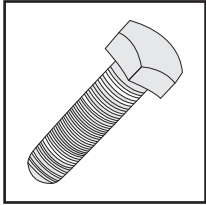
\_\_\_\_\_



\_\_\_\_\_

# Magnetic or Non-Magnetic?

Are the objects magnetic or non-magnetic?



**magnetic**



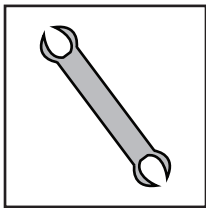
**non-magnetic**



**n**




**magnetic**




**n**


**non-magnetic**



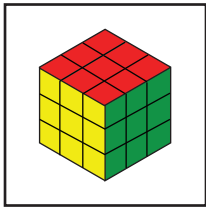
**magnetic**



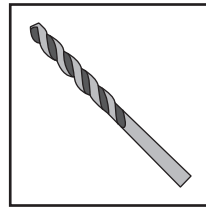
**magnetic**



**non-magnetic**



**non-magnetic**



**magnetic**

**PREVIEW**

Gain complete access to the largest collection of worksheets in all subjects!

Members, please log in to download this worksheet.

Not a member? Please sign up to gain complete access.

[www.mathworksheets4kids.com](http://www.mathworksheets4kids.com)