

Name : \_\_\_\_\_

# THE ROCK CYCLE

Label the stages and complete the rock cycle diagram.



**Metamorphic rock**

**Sedimentary rock**

**Volcanic eruption**

**Magma**


**Igneous rock**

**Sediment**

Name : \_\_\_\_\_

# THE ROCK CYCLE

Label the stages and complete the rock cycle diagram.




Volcanic eruption



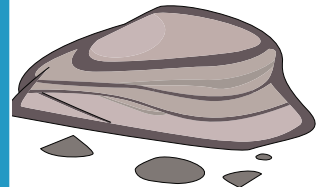
Igneous rock



Magma



Sediment



Metamorphic rock



Sedimentary rock

**PREVIEW**

Gain complete access to the largest collection of worksheets in all subjects!

Members, please log in to download this worksheet.

Not a member? Please sign up to gain complete access.

[www.mathworksheets4kids.com](http://www.mathworksheets4kids.com)

Metamorphic rock

Sedimentary rock

Volcanic eruption

Magma

Igneous rock

Sediment