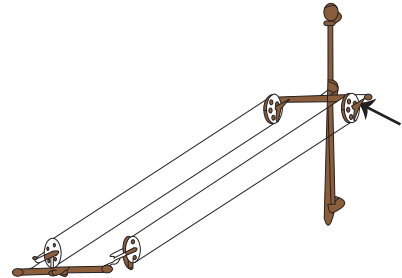



Name : _____

Simple Machines

Look at each object and identify the type of simple machine.





PREVIEW

Gain complete access to the largest collection of worksheets in all subjects!

Members, please log in to download this worksheet.

Not a member? Please sign up to gain complete access.


www.mathworksheets4kids.com



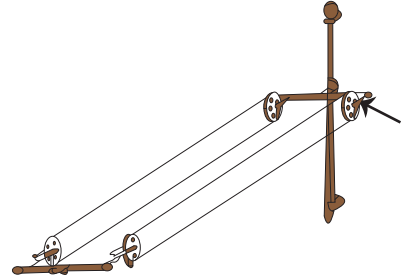
Name : _____

Simple Machines

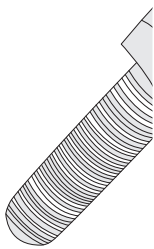
Look at each object and identify the type of simple machine.



lever



pulley



screw


PREVIEW

Gain complete access to the largest collection of worksheets in all subjects!


Members, please log in to download this worksheet.

Not a member? Please sign up to gain complete access.

www.mathworksheets4kids.com



inclined plane



wheel and axle