

Name : _____

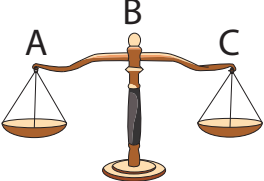
Three Classes of Levers

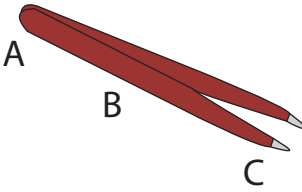
Identify the class of each lever and label the parts.

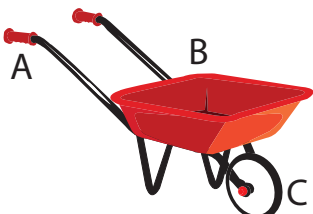
| | | |
|---|-----------------|----------------------------------|
|  | Type : _____ | A. _____ B. _____ C. _____ |
|---|-----------------|----------------------------------|

| | | |
|---|--|-------------------------------------|
|  | | A. _____ _____ _____ _____ |
|---|--|-------------------------------------|

| | | |
|---|--|----------------------------------|
|  | | _____ _____ _____ _____ |
|---|--|----------------------------------|

| | | |
|---|--|----------------------------------|
|  | | _____ _____ _____ _____ |
|---|--|----------------------------------|

| | | |
|---|-----------------|----------------------|
|  | Type : _____ | B. _____ C. _____ |
|---|-----------------|----------------------|

| | | |
|---|-----------------|----------------------------------|
|  | Type : _____ | A. _____ B. _____ C. _____ |
|---|-----------------|----------------------------------|

PREVIEW

Access the largest collection of worksheets for just **\$19.95** per year!

Members, please log in to download this worksheet. **Log in**

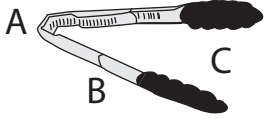
Not a member? Please sign up to gain complete access. **Sign up**

www.mathworksheets4kids.com

Name : _____

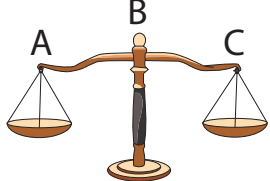
Three Classes of Levers

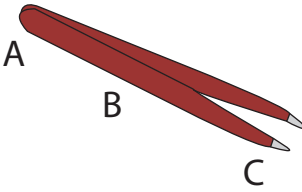
Identify the class of each lever and label the parts.

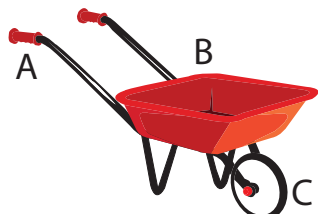
| | | |
|---|-----------------------------------|---|
|  | Type : _____ Class 3 | A. _____ fulcrum B. _____ effort C. _____ load |
|---|-----------------------------------|---|

| | | |
|---|--|---|
|  | | A. _____ effort _____ fulcrum _____ load |
|---|--|---|

| | | |
|---|--|--|
|  | | _____ effort _____ load _____ fulcrum |
|---|--|--|

| | | |
|---|--|--|
|  | | _____ effort _____ fulcrum _____ load |
|---|--|--|

| | | |
|---|-----------------------------------|--|
|  | Type : _____ Class 3 | _____ fulcrum B. _____ effort C. _____ load |
|---|-----------------------------------|--|

| | | |
|---|-----------------------------------|---|
|  | Type : _____ Class 2 | A. _____ effort B. _____ load C. _____ fulcrum |
|---|-----------------------------------|---|

PREVIEW

Access the largest collection of worksheets for just **\$19.95** per year!

Members, please log in to download this worksheet.
Log in

Not a member? Please sign up to gain complete access.
Sign up

www.mathworksheets4kids.com