

Name : _____

Combining 2D Shapes

Choose the composite shape that can be made by combining each pair of 2D shapes.

1)



and



triangle

rhombus

2)



and



square

hexagon

3)



and



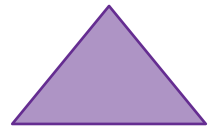
parallelogram

trapezoid

4)




and




pentagon

rectangle

5)



and



square

pentagon

6)



and



parallelogram

hexagon