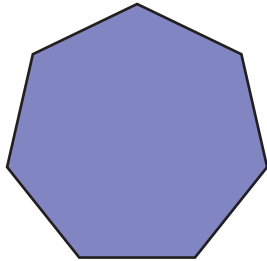


# Types of Polygons

Write the number of sides and name each polygon.

1)



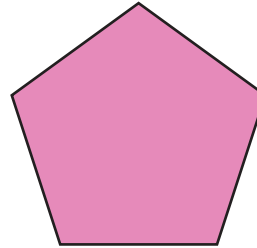
Number of sides

\_\_\_\_\_

Polygon type

\_\_\_\_\_

2)



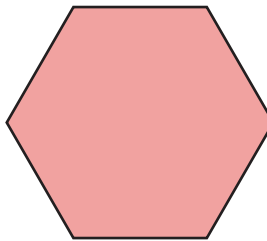
Number of sides

\_\_\_\_\_

Polygon type

\_\_\_\_\_

3)



Number of sides

\_\_\_\_\_

Polygon type

\_\_\_\_\_

4)

## PREVIEW

Gain complete access to the largest collection of worksheets in all subjects!

Members, please log in to download this worksheet.

Not a member? Please sign up to gain complete access.

[www.mathworksheets4kids.com](http://www.mathworksheets4kids.com)

Number of sides

\_\_\_\_\_

Polygon type

\_\_\_\_\_

5)



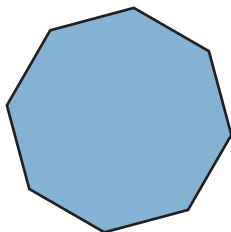
Number of sides

\_\_\_\_\_

Polygon type

\_\_\_\_\_

7)



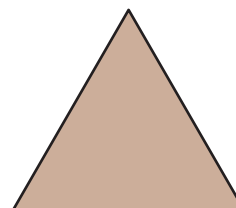
Number of sides

\_\_\_\_\_

Polygon type

\_\_\_\_\_

10)




Number of sides

\_\_\_\_\_

Polygon type

\_\_\_\_\_

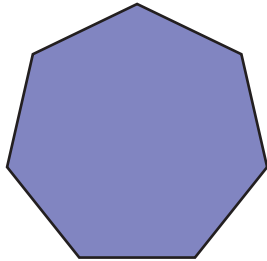
9)



**Types of Polygons**

Write the number of sides and name each polygon.

1)



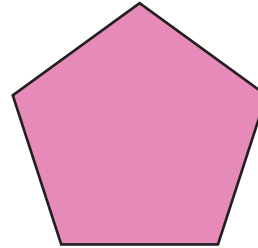
Number of sides

7

Polygon type

Heptagon

2)



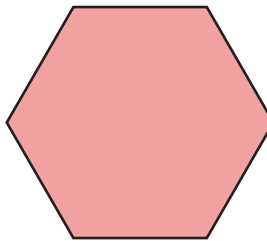
Number of sides

5

Polygon type

Pentagon

3)



4)

**PREVIEW**Gain complete access to the largest  
collection of worksheets in all subjects!Members, please  
log in to  
download this  
worksheet.Not a member?  
Please sign up to  
gain complete  
access.[www.mathworksheets4kids.com](http://www.mathworksheets4kids.com)

Number of sides

8

Polygon type

Octagon

5)



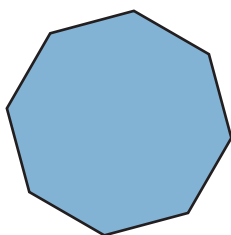
Number of sides

9

Polygon type

Nonagon

7)



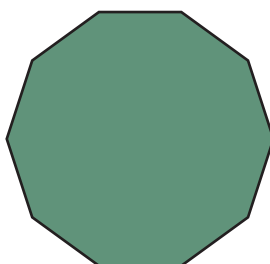
Number of sides

6

Polygon type

Hexagon

9)



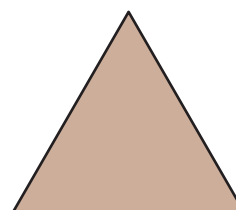
Number of sides

10

Polygon type

Decagon

10)



Number of sides

3

Polygon type

Triangle