

Name : _____

Quadrilaterals

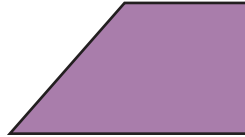
L2S1

Identify each quadrilateral.

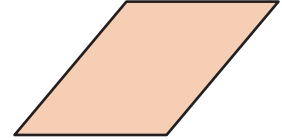
1)



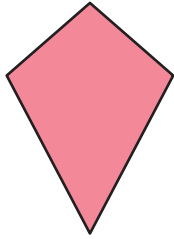
2)



3)



4)



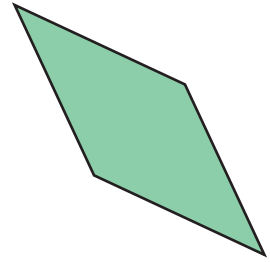
PREVIEW

Gain complete access to the largest collection of worksheets in all subjects!


Members, please log in to download this worksheet.

Not a member? Please sign up to gain complete access.

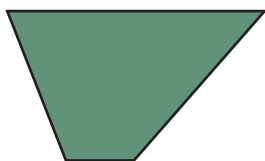
www.mathworksheets4kids.com




7)



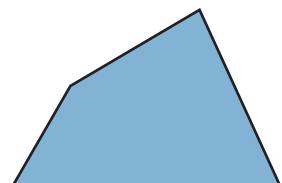
10)



11)



12)



Name : _____

Answer key

Quadrilaterals

L2S1

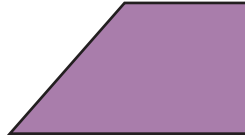
Identify each quadrilateral.

1)



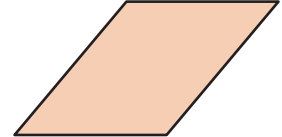
Rectangle

2)



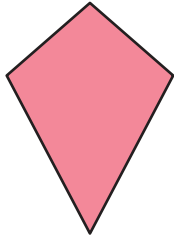
Trapezoid

3)



Parallelogram

4)



Kite

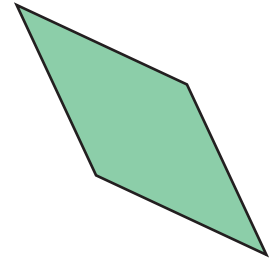
PREVIEW

Gain complete access to the largest collection of worksheets in all subjects!

Members, please log in to download this worksheet.

Not a member? Please sign up to gain complete access.

www.mathworksheets4kids.com




Rhombus

7)

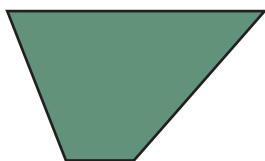


Parallelogram




Rectangle

10)



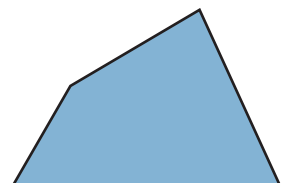
Trapezoid

11)



Rhombus

12)



Quadrilateral