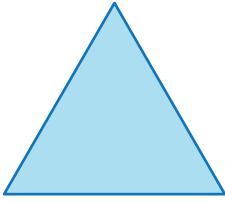


Name : _____

Sides and Corners

1) How many sides?



3

2

2) How many corners?



6

4

PREVIEW

Gain complete access to the largest collection of worksheets in all subjects!

Members, please log in to download this worksheet.

Not a member? Please sign up to gain complete access.

www.mathworksheets4kids.com

3) How many corners



5

4

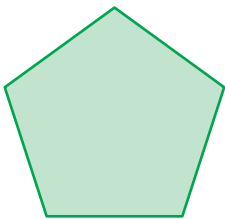
s?



7

5

5) How many sides?




4

6

5

ners?



1

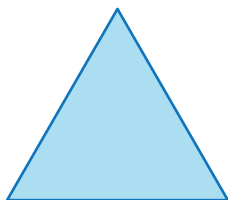
0

2

Name : _____

Sides and Corners

1) How many sides?



3

2

1

2) How many corners?



3

6

4

3) How many corners



5


4

PREVIEW
Gain complete access to the largest collection of worksheets in all subjects!

Members, please log in to download this worksheet.

Not a member? Please sign up to gain complete access.

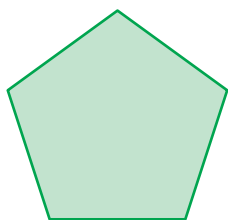
www.mathworksheets4kids.com



7

5

5) How many sides?



4

6

5



1

0

2