
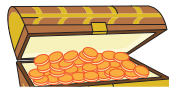
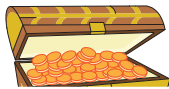


# Skip Counting by 100s

1) Count in 100s and write how many gold coins are there in all.



\_\_\_\_\_



\_\_\_\_\_

2) Count in 100s and write how many books are there in all.



\_\_\_\_\_

**PREVIEW**  
Gain complete access to the largest collection of worksheets in all subjects!

Members, please log in to download this worksheet.

Not a member? Please sign up to gain complete access.

[www.mathworksheets4kids.com](http://www.mathworksheets4kids.com)

3) Count in 100s and write how many candies are there in all.



\_\_\_\_\_



\_\_\_\_\_

Name : \_\_\_\_\_

# Skip Counting by 100s

1) Count in 100s and write how many gold coins are there in all.




100



200




300




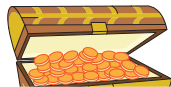
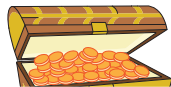
400



500



600



900

# PREVIEW

Gain complete access to the largest collection of worksheets in all subjects!

Members, please log in to download this worksheet.

Not a member? Please sign up to gain complete access.

[www.mathworksheets4kids.com](http://www.mathworksheets4kids.com)

2) Count in 100s and write how many books are there in all.



100

3) Count in 100s and write how many candies are there in all.



100



200



300



400



500



600



700



800



900



1,000



1,100



1,200