







# Skip Counting by 100s






A) Count by 100s and fill in the missing numbers.

1)      

6,100	6,200		6,400		
-------	-------	--	-------	--	--

2)      

9,400				9,800	
-------	--	--	--	-------	--

3)     

3,600					4,100
-------	--	--	--	--	-------

## PREVIEW

Gain complete access to the largest collection of worksheets in all subjects!

Members, please log in to download this worksheet.

Not a member? Please sign up to gain complete access.

[www.mathworksheets4kids.com](http://www.mathworksheets4kids.com)

B) Count by 100s and fill in the missing numbers.

1) 

8,000	8,100
-------	-------

8,600	
-------	--

2) 

700	
-----	--

1,300	
-------	--

3) 


2,200		2,400		2,600	2,700		2,900
-------	--	-------	--	-------	-------	--	-------

4) 







7,000		7,200		7,400		7,600	
-------	--	-------	--	-------	--	-------	--

**Skip Counting by 100s**

A) Count by 100s and fill in the missing numbers.

1)  6,100  6,200  **6,300**  6,400  **6,500**  **6,600**

2)  9,400  9,500  9,600  9,700  9,800  **9,900**

3)  3,600  3,700  3,800  3,900  **4,000**  **4,100**

B) Count by 100s and fill in the missing numbers.

1) 

8,000	8,100
-------	-------



8,600	<b>8,700</b>
-------	--------------

2) 

700	<b>800</b>
-----	------------



1,300	<b>1,400</b>
-------	--------------

3) 

2,200	<b>2,300</b>	2,400	<b>2,500</b>	2,600	2,700	<b>2,800</b>	2,900
-------	--------------	-------	--------------	-------	-------	--------------	-------

4) 

7,000	<b>7,100</b>	7,200	<b>7,300</b>	7,400	<b>7,500</b>	7,600	<b>7,700</b>
-------	--------------	-------	--------------	-------	--------------	-------	--------------

**PREVIEW**

Gain complete access to the largest collection of worksheets in all subjects!

Members, please log in to download this worksheet.

Not a member? Please sign up to gain complete access.

[www.mathworksheets4kids.com](http://www.mathworksheets4kids.com)