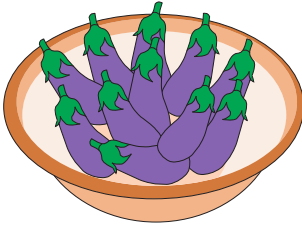


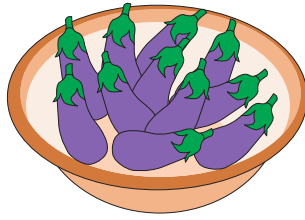
Name : \_\_\_\_\_

# Skip Counting by 11s

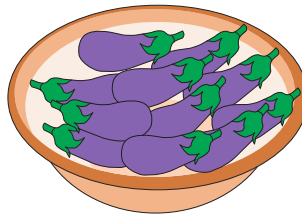
1) Count by 11s, and write how many eggplants are there in all.



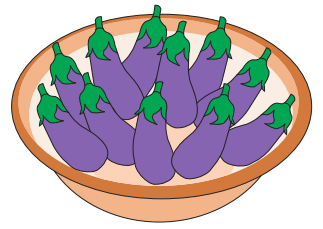
\_\_\_\_\_ 11 \_\_\_\_\_




\_\_\_\_\_ 22 \_\_\_\_\_



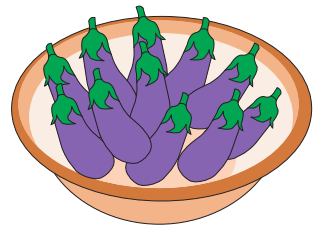
\_\_\_\_\_



\_\_\_\_\_




\_\_\_\_\_



\_\_\_\_\_

2) Count by 11s, and write how many cupcakes are there in total.




\_\_\_\_\_

Gain complete access to the largest collection of worksheets in all subjects!

Members, please log in to download this worksheet.

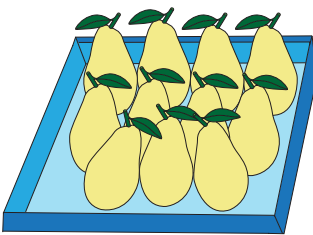
Not a member? Please sign up to gain complete access.

[www.mathworksheets4kids.com](http://www.mathworksheets4kids.com)




\_\_\_\_\_

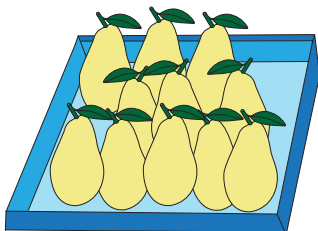
3) Count by 11s, and write how many pears are there in all.



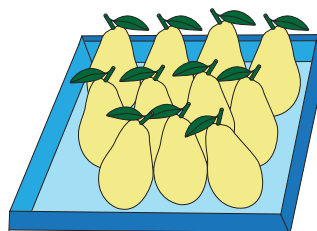
\_\_\_\_\_



\_\_\_\_\_



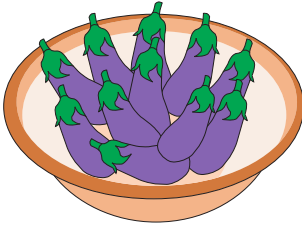
\_\_\_\_\_



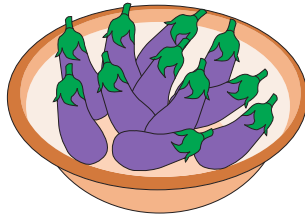
\_\_\_\_\_

# Skip Counting by 11s

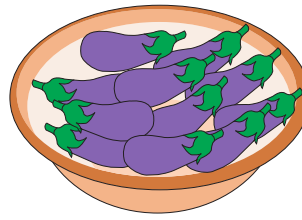
1) Count by 11s, and write how many eggplants are there in all.



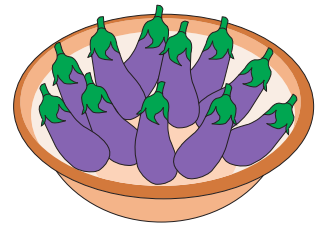
11




22



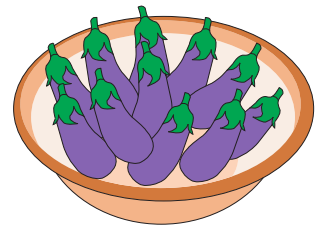
33



44




55



88

2) Count by 11s, and write how many cupcakes are there in total.




11

Gain complete access to the largest collection of worksheets in all subjects!

Members, please log in to download this worksheet.

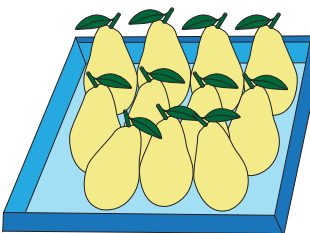
Not a member? Please sign up to gain complete access.

[www.mathworksheets4kids.com](http://www.mathworksheets4kids.com)



44


3) Count by 11s, and write how many pears are there in all.




11



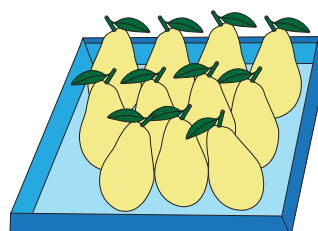
22



33



44



55