

Name : _____

Skip Counting by 11s

Type 2: S5


Count by 11s, and fill in the missing numbers.

0

11

22

33



1)

	23					286	
--	----	--	--	--	--	-----	--

2)

341							
-----	--	--	--	--	--	--	--

3)

	26						330
--	----	--	--	--	--	--	-----

4)

440						506	
-----	--	--	--	--	--	-----	--

5)

	374		396		418	429	
--	-----	--	-----	--	-----	-----	--

6)

209		231	242				286
-----	--	-----	-----	--	--	--	-----

PREVIEW

Gain complete access to the largest collection of worksheets in all subjects!

Members, please log in to download this worksheet.

Not a member? Please sign up to gain complete access.

www.mathworksheets4kids.com



Name : _____

Answer Key

Skip Counting by 11s

Type 2: S5

Count by 11s, and fill in the missing numbers.



1) **220** 231 242 253 264 275 286 **297**

2) 341 **352** 363 374 385 396 **407** **418**

3) **253** 264 275 286 297 308 **319** 330

4) 440 **451** 462 473 484 495 506 **517**

5) **363** 374 **385** 396 **407** 418 429 **440**

6) 209 **220** 231 242 **253** **264** **275** 286

PREVIEW

Gain complete access to the largest collection of worksheets in all subjects!

Members, please log in to download this worksheet.

Not a member? Please sign up to gain complete access.

www.mathworksheets4kids.com