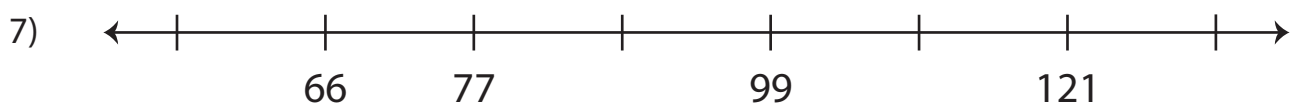
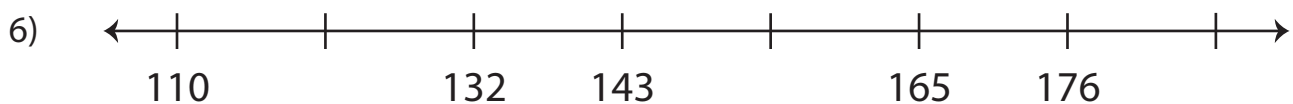
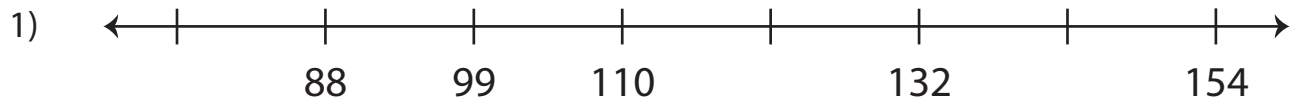


Name : _____

Skip Counting by 11s - Number Line

Level 1: S2

Skip count by 11s, and complete each number line.



PREVIEW

Gain complete access to the largest collection of worksheets in all subjects!

Members, please log in to download this worksheet.

Not a member? Please sign up to gain complete access.

www.mathworksheets4kids.com

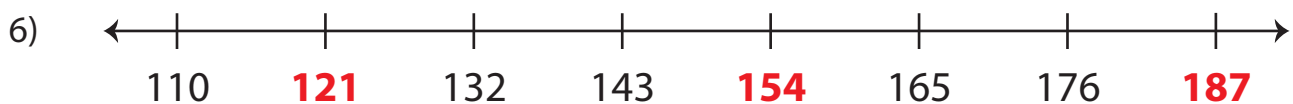
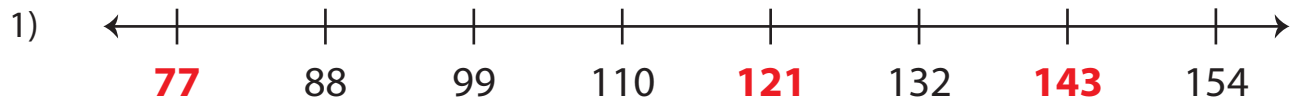
Name : _____

Answer Key

Skip Counting by 11s - Number Line

Level 1: S2

Skip count by 11s, and complete each number line.



PREVIEW

Gain complete access to the largest collection of worksheets in all subjects!

Members, please log in to download this worksheet.

Not a member? Please sign up to gain complete access.

www.mathworksheets4kids.com