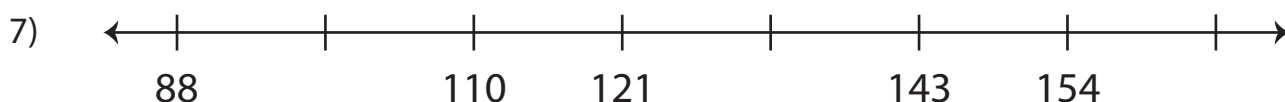

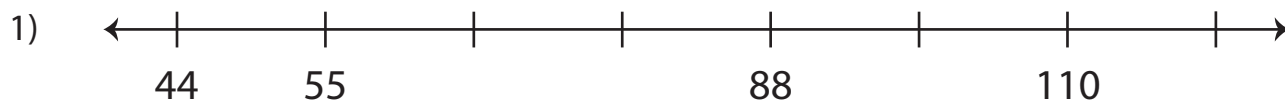


Name : \_\_\_\_\_

## Skip Counting by 11s - Number Line

Level 1: S3

Skip count by 11s, and complete each number line.



# PREVIEW

Gain complete access to the largest  
collection of worksheets in all subjects!

Members, please  
log in to  
download this  
worksheet.

Not a member?  
Please sign up to  
gain complete  
access.

[www.mathworksheets4kids.com](http://www.mathworksheets4kids.com)

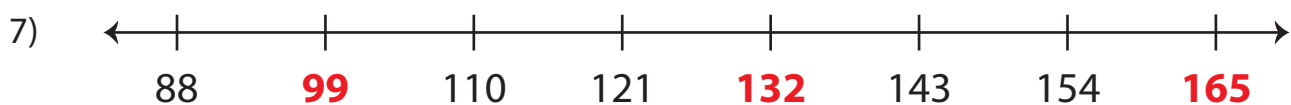
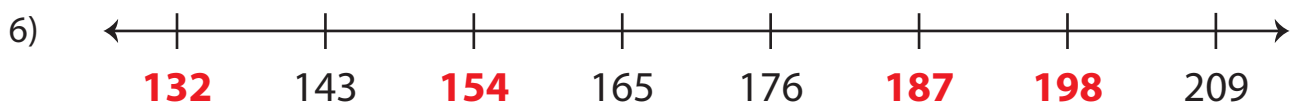
Name : \_\_\_\_\_

## Answer Key

Level 1: S3

### Skip Counting by 11s - Number Line

Skip count by 11s, and complete each number line.



# PREVIEW

Gain complete access to the largest collection of worksheets in all subjects!

Members, please log in to download this worksheet.

Not a member? Please sign up to gain complete access.

[www.mathworksheets4kids.com](http://www.mathworksheets4kids.com)