

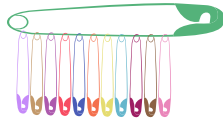
Name : _____

Skip Counting by 12s

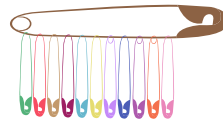
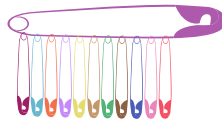
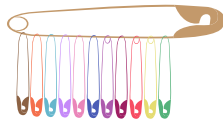
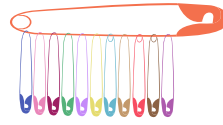
1) Count by 12s, and write how many safety pins are there in all.




12






24



2) Count by 12s, and w



3) Count by 12s, and w



PREVIEW

Gain complete access to the largest collection of worksheets in all subjects!

Members, please log in to download this worksheet.

Not a member? Please sign up to gain complete access.

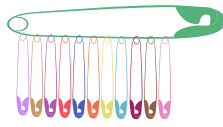
www.mathworksheets4kids.com

Skip Counting by 12s

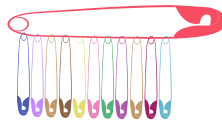
1) Count by 12s, and write how many safety pins are there in all.



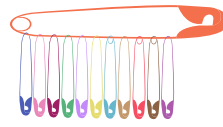
12



24



36



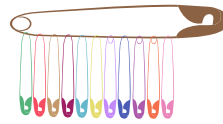
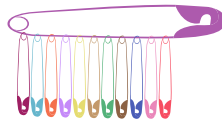
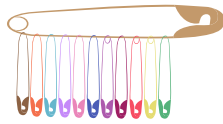
48



60



72




120

2) Count by 12s, and write how many jars are there in all.



12



PREVIEW

Gain complete access to the largest collection of worksheets in all subjects!

Members, please log in to download this worksheet.


Not a member? Please sign up to gain complete access.

www.mathworksheets4kids.com



60

3) Count by 12s, and write how many trophies are there in all.



12



24



36



48