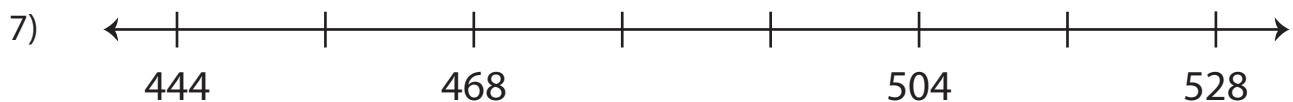
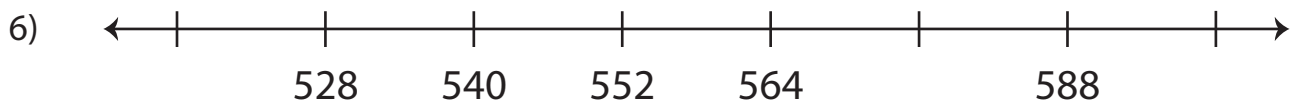
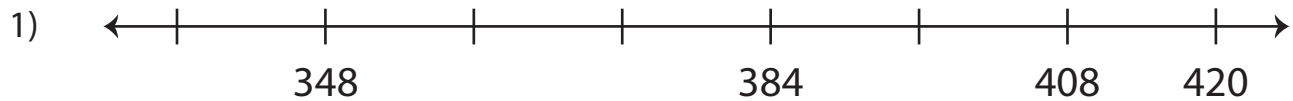


Name : \_\_\_\_\_

## Skip Counting by 12s - Number Line

Level 2: S3

Skip count by 12s, and complete each number line.



# PREVIEW

Gain complete access to the largest collection of worksheets in all subjects!

Members, please log in to download this worksheet.

Not a member? Please sign up to gain complete access.

[www.mathworksheets4kids.com](http://www.mathworksheets4kids.com)

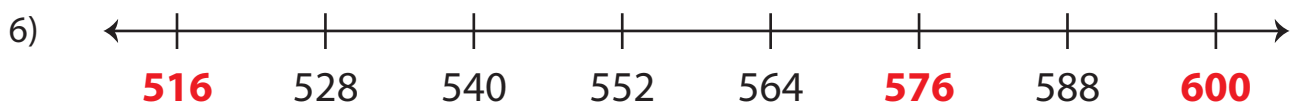
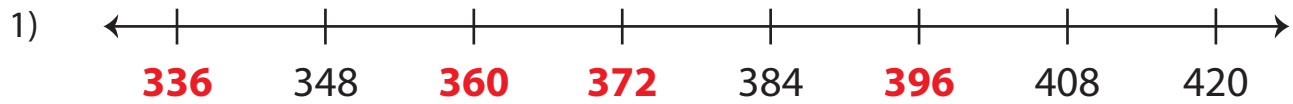
Name : \_\_\_\_\_

## Answer Key

Level 2: S3

### Skip Counting by 12s - Number Line

Skip count by 12s, and complete each number line.



# PREVIEW

Gain complete access to the largest collection of worksheets in all subjects!

Members, please log in to download this worksheet.

Not a member? Please sign up to gain complete access.

[www.mathworksheets4kids.com](http://www.mathworksheets4kids.com)