


Name : _____

Skip Counting by 12s

Easy: S3

Count by 12s, and complete the path to help Prince Alan retrace his steps back to Princess Mae.



120


PREVIEW

Gain complete access to the largest collection of worksheets in all subjects!

Members, please log in to download this worksheet.

Not a member? Please sign up to gain complete access.

www.mathworksheets4kids.com



36




Name : _____

Answer Key

Skip Counting by 12s

Easy: S3

Count by 12s, and complete the path to help Prince Alan retrace his steps back to Princess Mae.



120

PREVIEW

Gain complete access to the largest collection of worksheets in all subjects!

Members, please log in to download this worksheet.

Not a member? Please sign up to gain complete access.

www.mathworksheets4kids.com



36

24

12