

Name : _____

Skip Counting by 2s

Sheet 2

1) Count by 2s, and write how many candles are there in total.



2



4



6



8




10




12

2) Count by 2s, and write how many pineapples are there in all.



3) Count by 2s, and




Gain complete access to the largest collection of worksheets in all subjects!

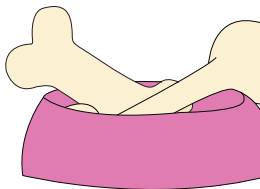
Members, please log in to download this worksheet.

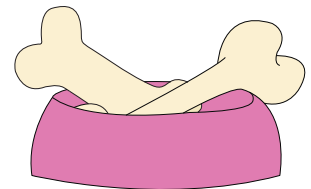
Not a member? Please sign up to gain complete access.



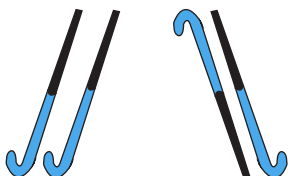


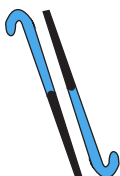
4) Count by 2s, and




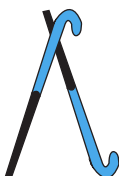


5) Count by 2s, and write how many hockey sticks are there in total.

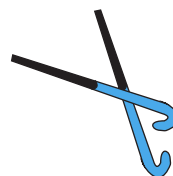




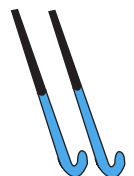












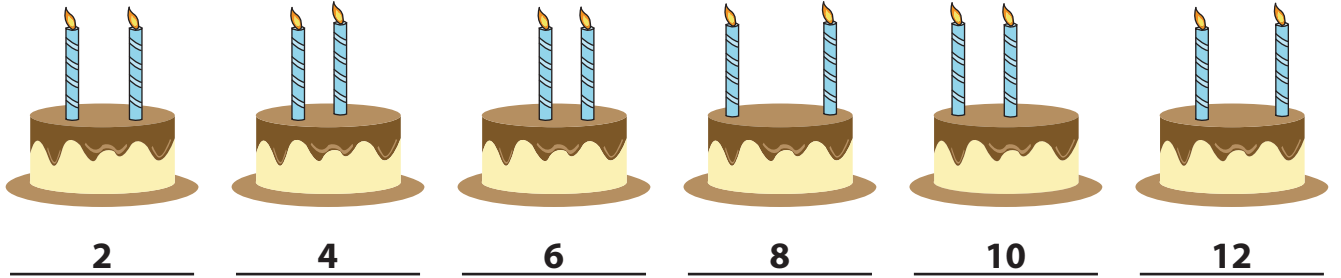
Name : _____

Answer Key

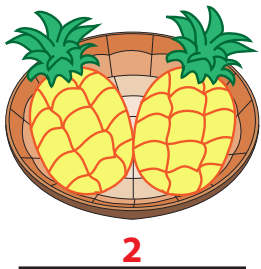
Sheet 2

Skip Counting by 2s


1) Count by 2s, and write how many candles are there in total.



2) Count by 2s, and write how many pineapples are there in all.



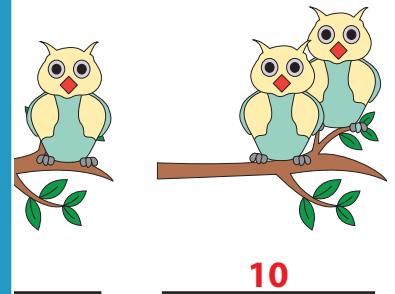
3) Count by 2s, and



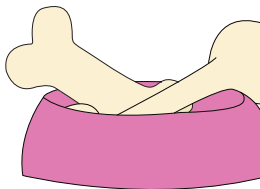
Gain complete access to the largest collection of worksheets in all subjects!

Members, please log in to download this worksheet.

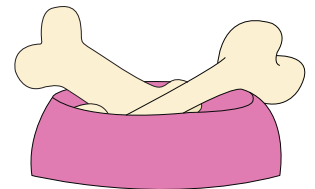
Not a member? Please sign up to gain complete access.



4) Count by 2s, and



www.mathworksheets4kids.com



5) Count by 2s, and write how many hockey sticks are there in total.

