


Name : _____


Skip Counting by 2s

Sheet 3

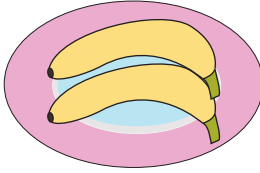
1) Count by 2s, and write how many bananas are there altogether.




2




4



6





8



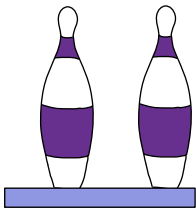
10

2) Count by 2s, and write how many fish are there in all.





3) Count by 2s, and




Gain complete access to the largest collection of worksheets in all subjects!


Members, please log in to download this worksheet.

Not a member? Please sign up to gain complete access.


www.mathworksheets4kids.com

4) Count by 2s, and





5) Count by 2s, and write how many cherries are there in total.




Name : _____

Answer Key


Sheet 3

Skip Counting by 2s

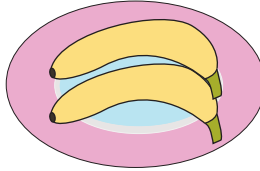
1) Count by 2s, and write how many bananas are there altogether.




2




4



6




8




10

2) Count by 2s, and write how many fish are there in all.



2

4

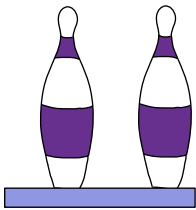


16

18

20

3) Count by 2s, and



2

Gain complete access to the largest collection of worksheets in all subjects!


Members, please log in to download this worksheet.

Not a member? Please sign up to gain complete access.

www.mathworksheets4kids.com

tal.

4) Count by 2s, and




2


4

6


8




5) Count by 2s, and write how many cherries are there in total.




2




4




6




8



10



12



14