


Name : _____


Skip Counting by 2s

Sheet 4


1) Count by 2s, and write how many plums are there in all.




2




4



6




8



10

2) Count by 2s, and write how many parrots are there in total.




PREVIEW

Gain complete access to the largest
collection of worksheets in all subjects!

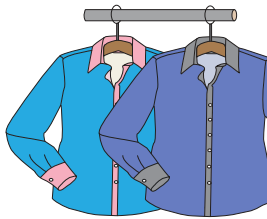
Members, please
log in to
download this
worksheet.

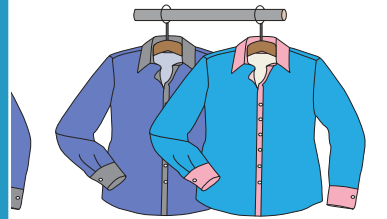
Not a member?
Please sign up to
gain complete
access.

www.mathworksheets4kids.com




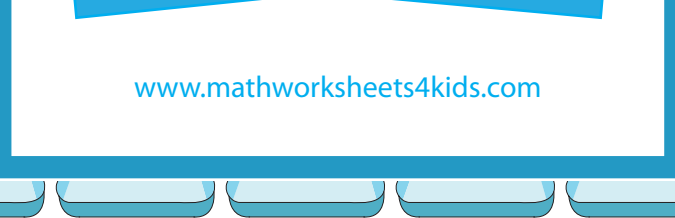
3) Count by 2s, and






4) Count by 2s, and







5) Count by 2s, and write how many mushrooms are there in all.


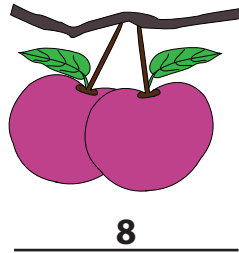

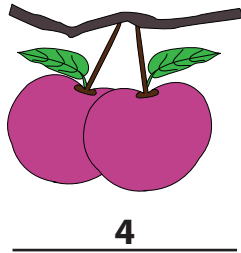
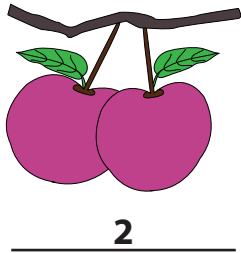




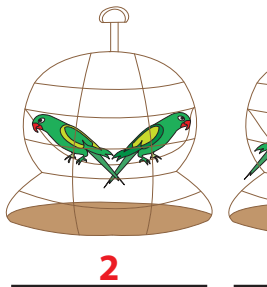


Skip Counting by 2s

1) Count by 2s, and write how many plums are there in all.



2) Count by 2s, and write how many parrots are there in total.



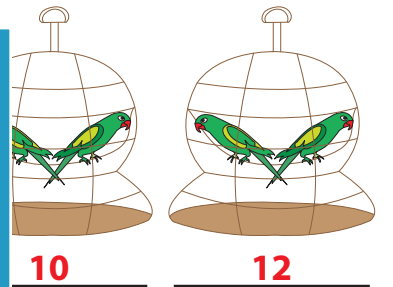
PREVIEW

Gain complete access to the largest collection of worksheets in all subjects!

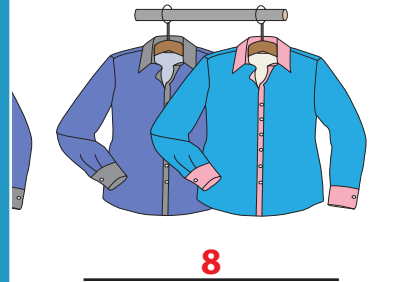
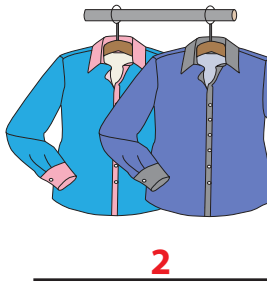
Members, please log in to download this worksheet.

Not a member? Please sign up to gain complete access.


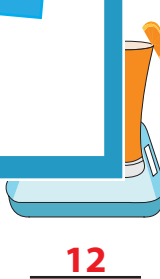

www.mathworksheets4kids.com



3) Count by 2s, and



4) Count by 2s, and



together.

5) Count by 2s, and write how many mushrooms are there in all.

