

Name : \_\_\_\_\_

# Skip Counting by 3s


Sheet 1

1) Count by 3s, and write how many mushrooms are there altogether.



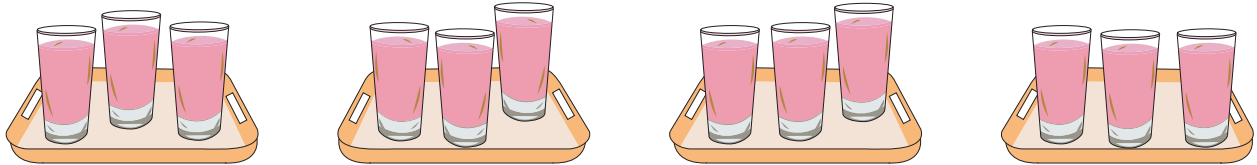
    3              6              9             12            15   

2) Count by 3s, and write how many pumpkins are there in total.



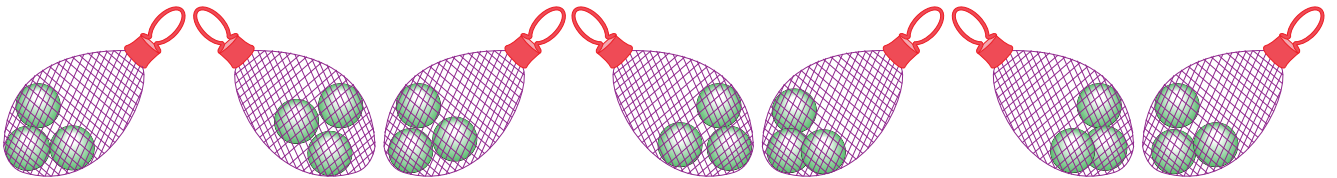
\_\_\_\_\_

3) Count by 3s, and write how many glasses of juice are there in all.



\_\_\_\_\_

4) Count by 3s, and write how many marbles are there in all.



\_\_\_\_\_

5) Count by 3s, and write how many slices of pizza are there in total.



\_\_\_\_\_


Name : \_\_\_\_\_

## Answer Key


# Skip Counting by 3s

Sheet 1

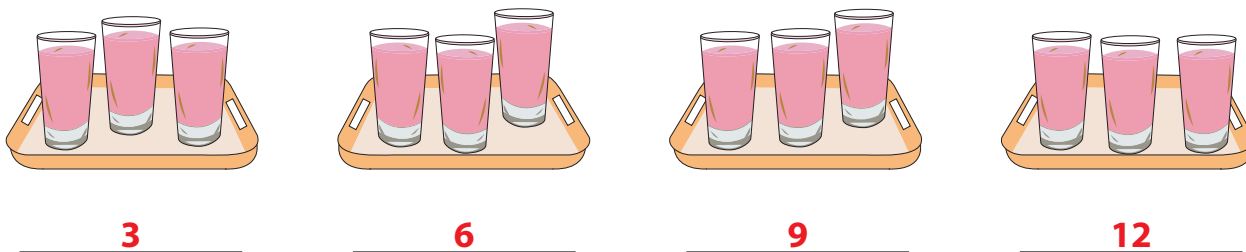
1) Count by 3s, and write how many mushrooms are there altogether.



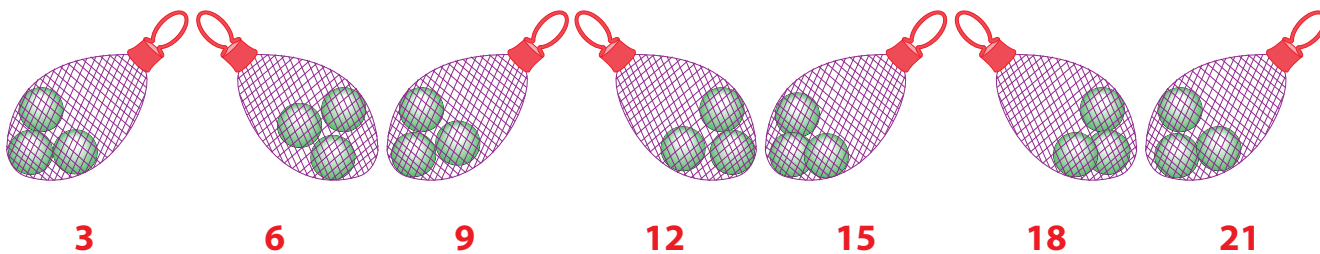
2) Count by 3s, and write how many pumpkins are there in total.



3) Count by 3s, and write how many glasses of juice are there in all.



4) Count by 3s, and write how many marbles are there in all.



5) Count by 3s, and write how many slices of pizza are there in total.

