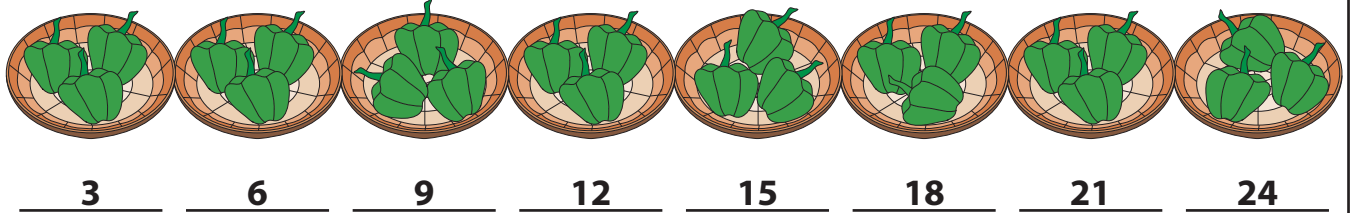


Name : \_\_\_\_\_

# Skip Counting by 3s

Sheet 2


1) Count by 3s, and write how many bell peppers are there in total.



2) Count by 3s, and write how many cupcakes are there in all.



3) Count by 3s, and




**PREVIEW**

Gain complete access to the largest collection of worksheets in all subjects!

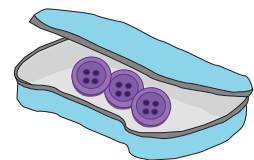
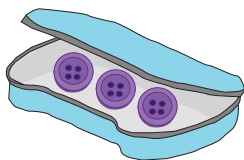
Members, please log in to download this worksheet.

Not a member? Please sign up to gain complete access.

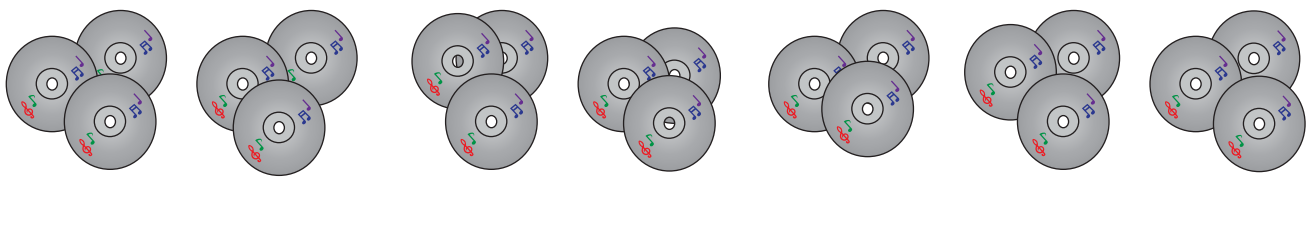
[www.mathworksheets4kids.com](http://www.mathworksheets4kids.com)



4) Count by 3s, and



5) Count by 3s, and write how many compact discs are there altogether.



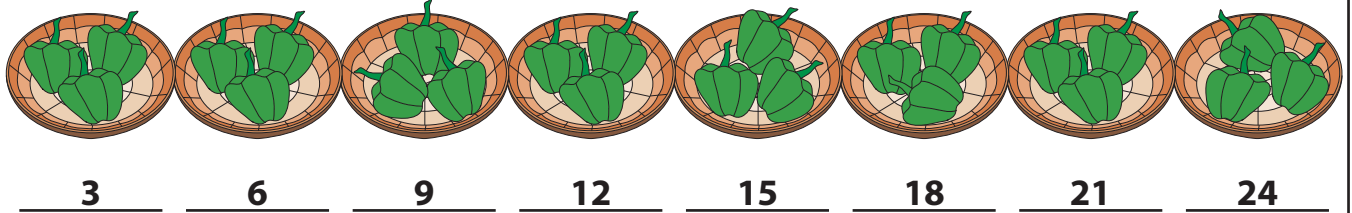
Name : \_\_\_\_\_

## Answer Key

# Skip Counting by 3s

Sheet 2

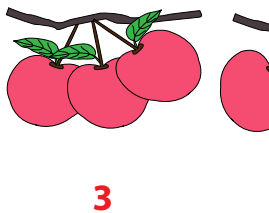
- 1) Count by 3s, and write how many bell peppers are there in total.



- 2) Count by 3s, and write how many cupcakes are there in all.



- 3) Count by 3s, and




Gain complete access to the largest collection of worksheets in all subjects!

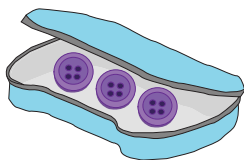
Members, please log in to download this worksheet.

Not a member? Please sign up to gain complete access.

[www.mathworksheets4kids.com](http://www.mathworksheets4kids.com)

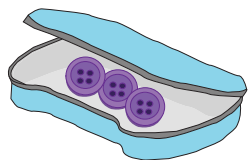


- 4) Count by 3s, and



6

9



- 5) Count by 3s, and write how many compact discs are there altogether.

