


Name : _____


Skip Counting by 3s

Sheet 3


1) Count by 3s, and write how many aliens are there in all.



_____ **3** _____



_____ **6** _____



_____ **9** _____

2) Count by 3s, and write how many candles are there in total.



PREVIEW

Gain complete access to the largest collection of worksheets in all subjects!

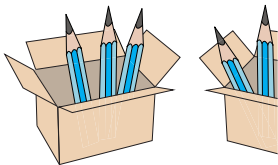
Members, please log in to download this worksheet.


Not a member? Please sign up to gain complete access.

www.mathworksheets4kids.com





3) Count by 3s, and






4) Count by 3s, and







5) Count by 3s, and write how many beads are there in all.










Name : _____

Answer Key


Sheet 3

Skip Counting by 3s


- 1) Count by 3s, and write how many aliens are there in all.



3



6




9

- 2) Count by 3s, and write how many candles are there in total.



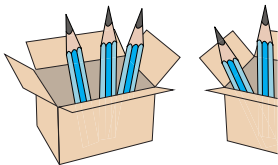
3




15

18

- 3) Count by 3s, and




3




18

21

- 4) Count by 3s, and



3



6

9


12

15


- 5) Count by 3s, and write how many beads are there in all.




3



6



9



12

PREVIEW

Gain complete access to the largest collection of worksheets in all subjects!

Members, please log in to download this worksheet.

Not a member? Please sign up to gain complete access.

www.mathworksheets4kids.com