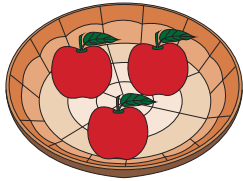



Name : _____

Skip Counting by 3s


1) Count by 3s, and write how many apples are there in total.



3





6



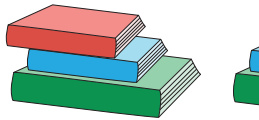
9

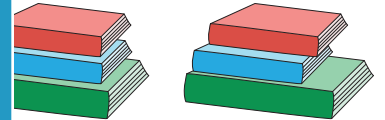
2) Count by 3s, and write how many glasses of juice are there altogether.

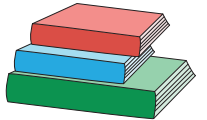





3) Count by 3s, and







4) Count by 3s, and





















5) Count by 3s, and write how many cookies are there altogether.











PREVIEW

Gain complete access to the largest collection of worksheets in all subjects!

Members, please log in to download this worksheet.

Not a member? Please sign up to gain complete access.

www.mathworksheets4kids.com

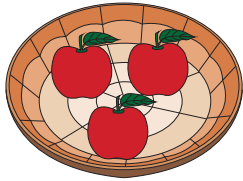
Name : _____

Answer Key


Skip Counting by 3s

Sheet 4


1) Count by 3s, and write how many apples are there in total.



3




6




9

2) Count by 3s, and write how many glasses of juice are there altogether.

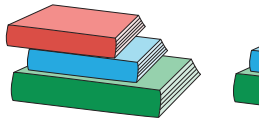


3



12

3) Count by 3s, and



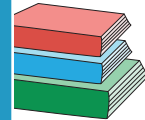
3

Gain complete access to the largest collection of worksheets in all subjects!

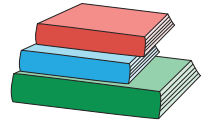
Members, please log in to download this worksheet.

Not a member? Please sign up to gain complete access.

www.mathworksheets4kids.com




15



18

4) Count by 3s, and



3



6




9




12



15




18




21


5) Count by 3s, and write how many cookies are there altogether.




3



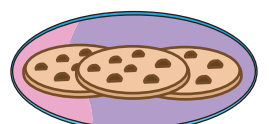
6



9



12



15