



Name : _____

Skip Counting by 3s


1) Count by 3s, and write how many hats are there altogether.




_____ **3** _____



_____ **6** _____





_____ **9** _____




_____ **12** _____

2) Count by 3s, and write how many pineapples are there in total.






3) Count by 3s, and



Gain complete access to the largest collection of worksheets in all subjects!

Members, please log in to download this worksheet.

Not a member? Please sign up to gain complete access.



4) Count by 3s, and



there in total.



5) Count by 3s, and write how many bottles are there in all.








Name : _____

Answer Key


Skip Counting by 3s

Sheet 5


1) Count by 3s, and write how many hats are there altogether.




3



6




9



12

2) Count by 3s, and write how many pineapples are there in total.



3


PREVIEW

Gain complete access to the largest collection of worksheets in all subjects!


Members, please log in to download this worksheet.

Not a member? Please sign up to gain complete access.

www.mathworksheets4kids.com




15



18

3) Count by 3s, and



3

Gain complete access to the largest collection of worksheets in all subjects!

Members, please log in to download this worksheet.

Not a member? Please sign up to gain complete access.

www.mathworksheets4kids.com



18



21

4) Count by 3s, and



3

Gain complete access to the largest collection of worksheets in all subjects!

Members, please log in to download this worksheet.

Not a member? Please sign up to gain complete access.

www.mathworksheets4kids.com



6



9



12



15

there in total.

5) Count by 3s, and write how many bottles are there in all.



3



6



9