




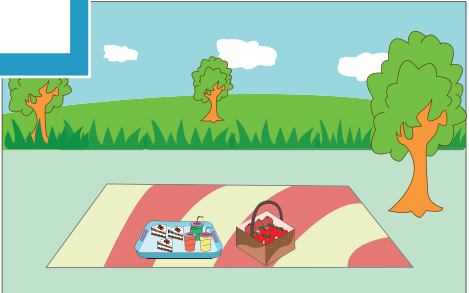
Name : _____

Skip Counting by 3s - Maze

Type 3

Count by 3s. Color the path, and find out where the Smiths went over the weekend.



			3	6	10	74	21	42
			20	9	12	15	18	21
			5	43	55	82	69	24
8	35						26	27
70	58						47	30
87	61						73	33
13							39	36
28							97	18
86	12							
72	41	63	60	57	65			
52	17	37	91	66	44	11	57	9

PREVIEW

Gain complete access to the largest collection of worksheets in all subjects!

Members, please log in to download this worksheet.

Not a member? Please sign up to gain complete access.

www.mathworksheets4kids.com

The Smiths went to the _____ .