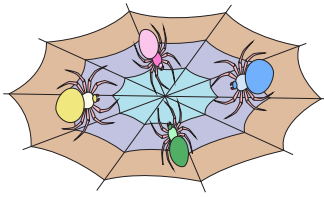


Name : _____

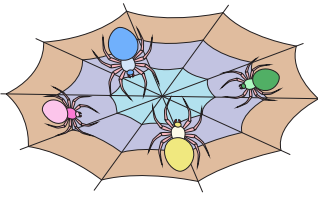
Skip Counting by 4s

Sheet 2

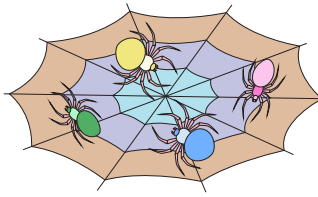
1) Count by 4s, and write how many spiders are there in all.



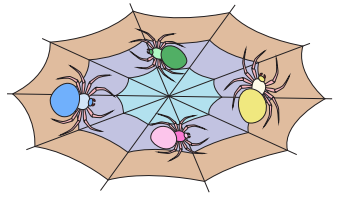
4



8




12




16


2) Count by 4s, and write how many fish are there in total.

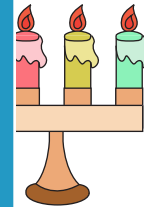








3) Count by 4s, and






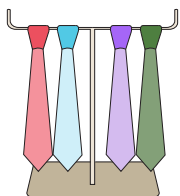


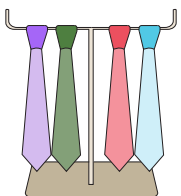
4) Count by 4s, and

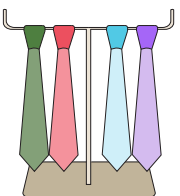


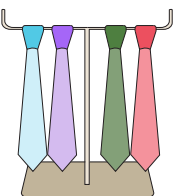


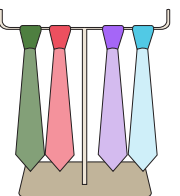
5) Count by 4s, and write how many neckties are there in all.

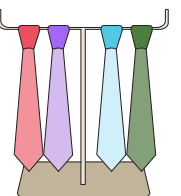


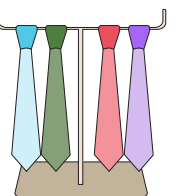












PREVIEW

Gain complete access to the largest collection of worksheets in all subjects!

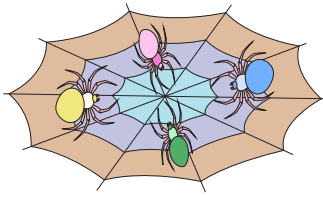
Members, please log in to download this worksheet.

Not a member? Please sign up to gain complete access.

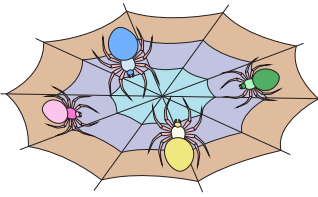
www.mathworksheets4kids.com

Skip Counting by 4s

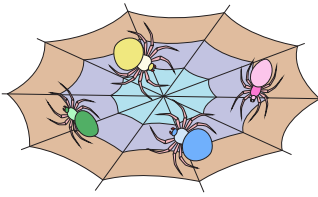
1) Count by 4s, and write how many spiders are there in all.



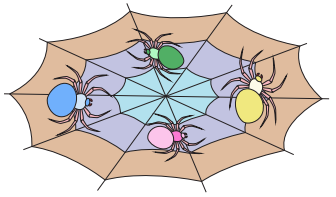
4



8




12



16

2) Count by 4s, and write how many fish are there in total.



4


PREVIEW

Gain complete access to the largest collection of worksheets in all subjects!

Members, please log in to download this worksheet.


Not a member? Please sign up to gain complete access.

www.mathworksheets4kids.com

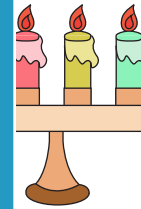


20


3) Count by 4s, and



4




20




24

4) Count by 4s, and

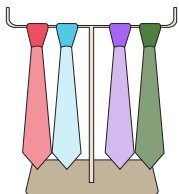


4

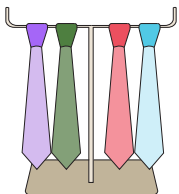


12

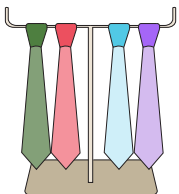
5) Count by 4s, and write how many neckties are there in all.



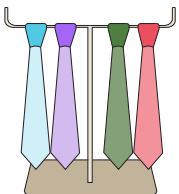
4



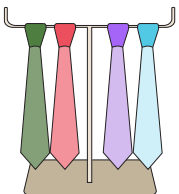
8



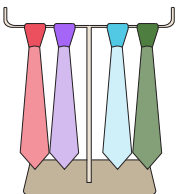
12



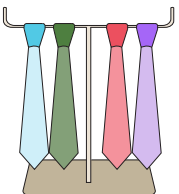
16



20



24



28