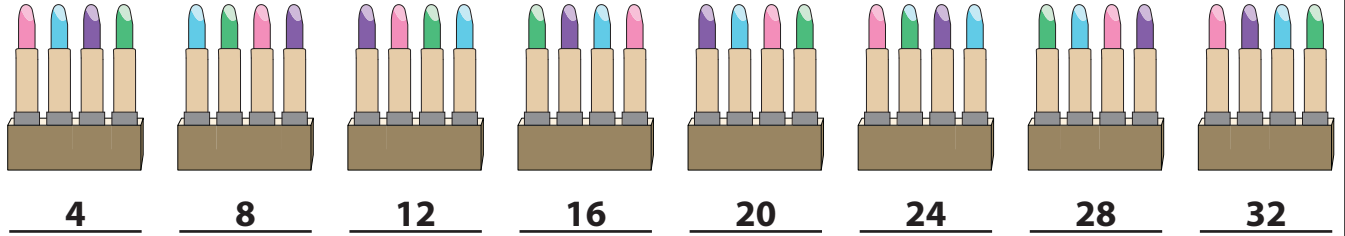


Skip Counting by 4s

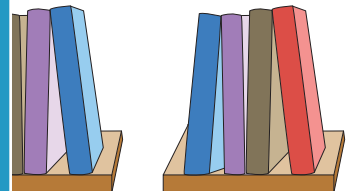

1) Count by 4s, and write how many tubes of lipstick are there in all.



2) Count by 4s, and write how many hats are there in total.



3) Count by 4s, and



PREVIEW


Gain complete access to the largest collection of worksheets in all subjects!

Members, please log in to download this worksheet.


Not a member? Please sign up to gain complete access.

www.mathworksheets4kids.com

4) Count by 4s, and

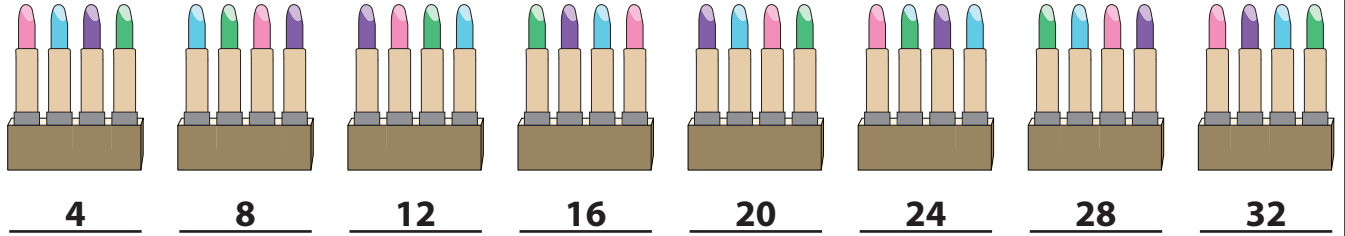


5) Count by 4s, and write how many toys are there altogether.



Skip Counting by 4s

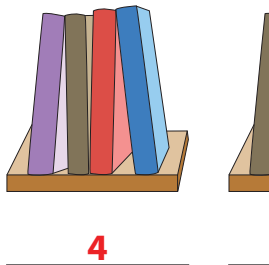
1) Count by 4s, and write how many tubes of lipstick are there in all.



2) Count by 4s, and write how many hats are there in total.



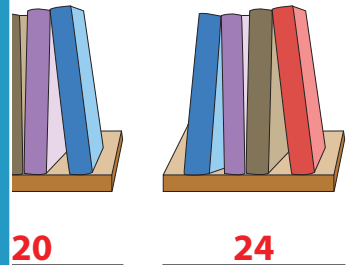
3) Count by 4s, and



Gain complete access to the largest collection of worksheets in all subjects!

Members, please log in to download this worksheet.

Not a member? Please sign up to gain complete access.



4) Count by 4s, and



www.mathworksheets4kids.com



5) Count by 4s, and write how many toys are there altogether.

