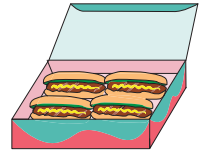
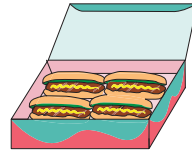
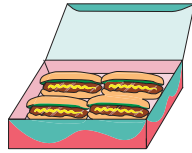
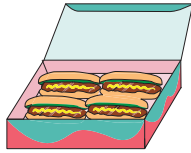
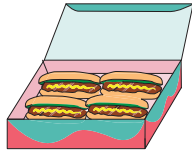
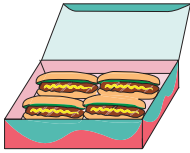


Name : _____

Skip Counting by 4s

1) Count by 4s, and write how many hot dogs are there altogether?



 4

 8

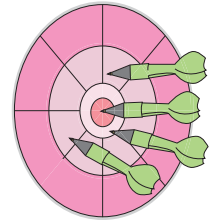
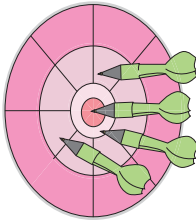
 12

 16

 20

 24

2) Count by 4s, and write how many darts are there in all?




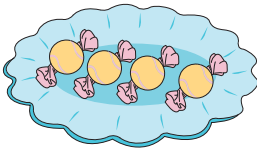
3) Count by 4s, and

Gain complete access to the largest collection of worksheets in all subjects!




Members, please log in to download this worksheet.

Not a member? Please sign up to gain complete access.





www.mathworksheets4kids.com



4) Count by 4s, and

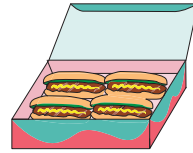
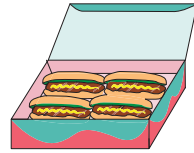
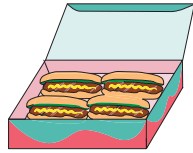
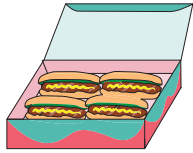
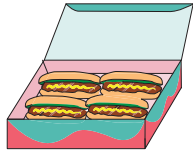
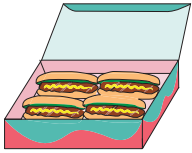


5) Count by 4s, and write how many pears are there in total?



Skip Counting by 4s

1) Count by 4s, and write how many hot dogs are there altogether?



4

8

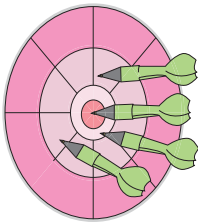
12

16

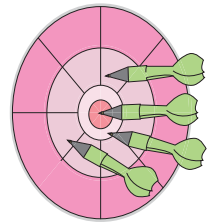
20

24

2) Count by 4s, and write how many darts are there in all?

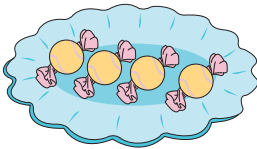


4



12

3) Count by 4s, and




4

Gain complete access to the largest collection of worksheets in all subjects!

Members, please log in to download this worksheet.


Not a member? Please sign up to gain complete access.

www.mathworksheets4kids.com




20

4) Count by 4s, and



4



8



12



16




20




24



28




32




36


5) Count by 4s, and write how many pears are there in total?




4



8



12



16