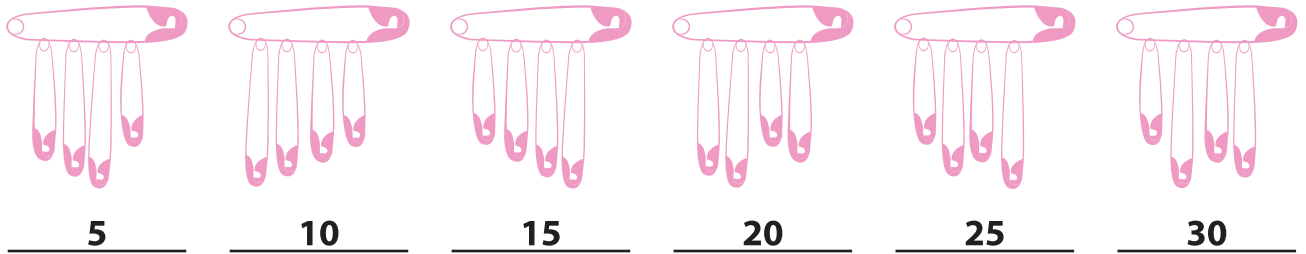


Name : _____



Skip Counting by 5s

Sheet 2



- 1) Count by 5s, and write how many safety pins are there in total.




- 2) Count by 5s, and write how many donuts are there altogether.



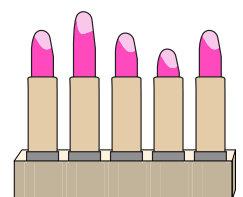
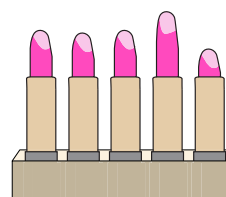
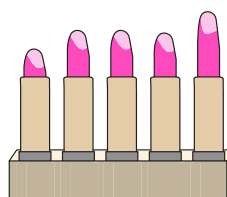
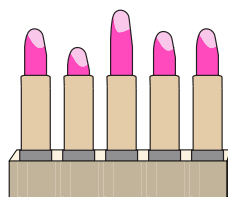
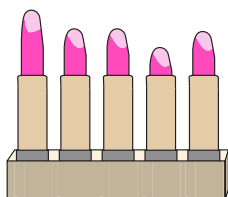
- 3) Count by 5s, and



- 4) Count by 5s, and



- 5) Count by 5s, and write how many tubes of lipstick are there in all.



PREVIEW

Gain complete access to the largest collection of worksheets in all subjects!

Members, please log in to download this worksheet.

Not a member? Please sign up to gain complete access.

www.mathworksheets4kids.com