


Name : _____


Skip Counting by 5s

Sheet 3


- 1) Count by 5s, and write how many loaves of bread are there in all.



5

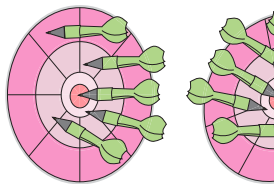



10




15

- 2) Count by 5s, and write how many darts are there in total.





- 3) Count by 5s, and




PREVIEW

Gain complete access to the largest collection of worksheets in all subjects!

Members, please log in to download this worksheet.


Not a member? Please sign up to gain complete access.


www.mathworksheets4kids.com




together.


- 4) Count by 5s, and








- 5) Count by 5s, and write how many bananas are there altogether.















Name : _____

Answer Key


Skip Counting by 5s

Sheet 3


- 1) Count by 5s, and write how many loaves of bread are there in all.



5

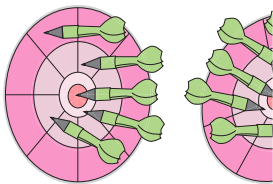


10




15

- 2) Count by 5s, and write how many darts are there in total.



5


1



30

35

- 3) Count by 5s, and




5

Gain complete access to the largest collection of worksheets in all subjects!

Members, please log in to download this worksheet.


Not a member? Please sign up to gain complete access.

www.mathworksheets4kids.com



25

- 4) Count by 5s, and



5


10

15




20


- 5) Count by 5s, and write how many bananas are there altogether.




5




10




15



20



25



30