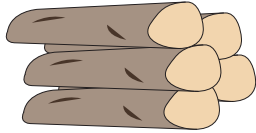


Name : _____

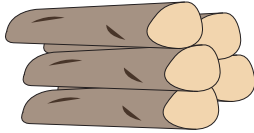
Skip Counting by 5s

Sheet 4

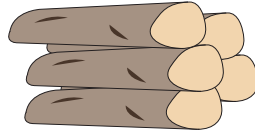
- 1) Count by 5s, and write how many logs of firewood are there in total.



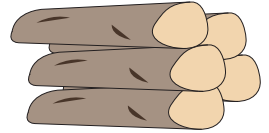
5



10

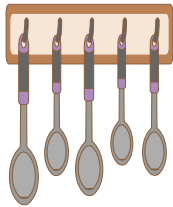


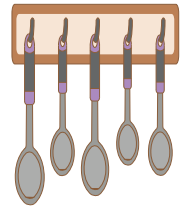
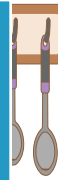
15



20

- 2) Count by 5s, and write how many spoons are there altogether.






- 3) Count by 5s, and








- 4) Count by 5s, and




- 5) Count by 5s, and write how many slices of cake are there in all.









PREVIEW

Gain complete access to the largest collection of worksheets in all subjects!

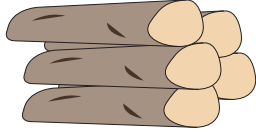
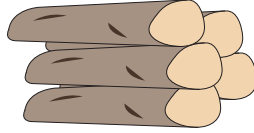
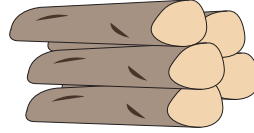
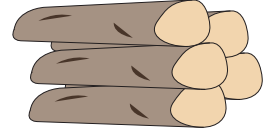
Members, please log in to download this worksheet.

Not a member? Please sign up to gain complete access.

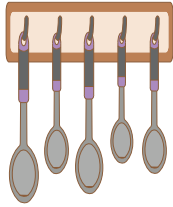
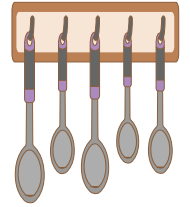
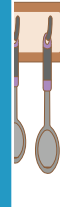
www.mathworksheets4kids.com

Skip Counting by 5s

- 1) Count by 5s, and write how many logs of firewood are there in total.

5101520


- 2) Count by 5s, and write how many spoons are there altogether.

525

- 3) Count by 5s, and

515

- 4) Count by 5s, and

510

PREVIEW





Gain complete access to the largest collection of worksheets in all subjects!

Members, please log in to download this worksheet.

Not a member? Please sign up to gain complete access.

www.mathworksheets4kids.com

- 5) Count by 5s, and write how many slices of cake are there in all.

5101520