


Name : _____

Skip Counting by 5s

1) Count by 5s, and write how many flowers are there altogether.

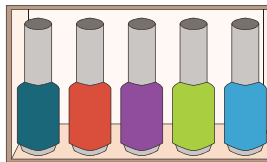


5 10 15 20 25 30 35 40 45 50

2) Count by 5s, and write how many tubes of paint are there in all.



3) Count by 5s, and



PREVIEW

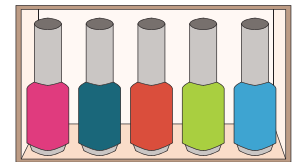
Gain complete access to the largest collection of worksheets in all subjects!

Members, please log in to download this worksheet.



Not a member? Please sign up to gain complete access.

www.mathworksheets4kids.com

_____ are in total.



4) Count by 5s, and



5) Count by 5s, and write how many kitchen knives are there altogether.

