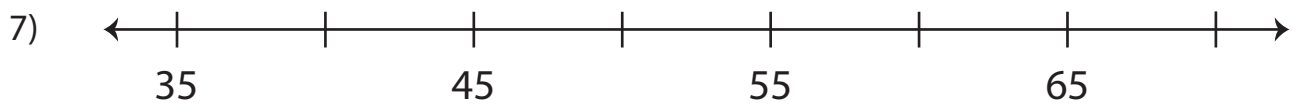
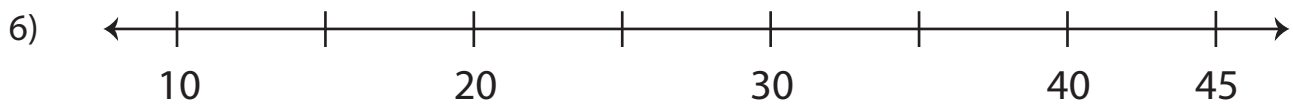
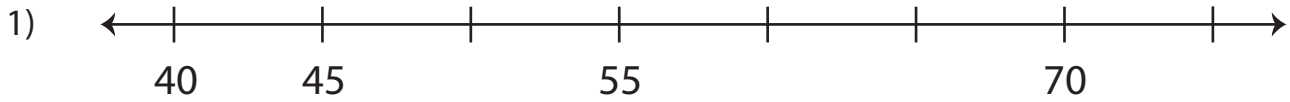


Name : _____

Skip Counting by 5s - Number Line

Level 1: S3

Skip count by 5s, and complete each number line.



PREVIEW

Gain complete access to the largest
collection of worksheets in all subjects!

Members, please
log in to
download this
worksheet.

Not a member?
Please sign up to
gain complete
access.

www.mathworksheets4kids.com

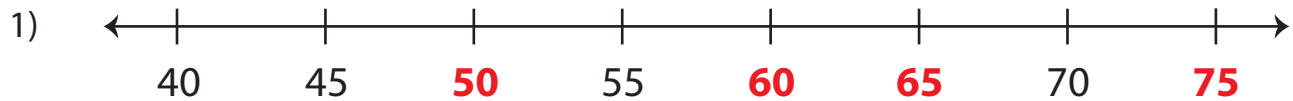
Name : _____

Answer Key

Skip Counting by 5s - Number Line

Level 1: S3

Skip count by 5s, and complete each number line.



PREVIEW

Gain complete access to the largest collection of worksheets in all subjects!

Members, please log in to download this worksheet.

Not a member? Please sign up to gain complete access.

www.mathworksheets4kids.com