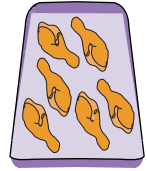
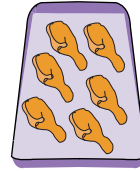
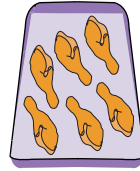
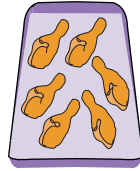
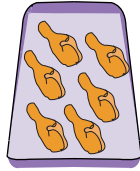
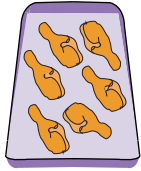
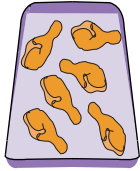
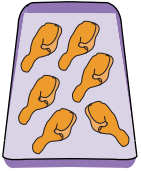


Name : \_\_\_\_\_

# Skip Counting by 6s

Sheet 1

1) Count by 6s, and write how many chicken drumsticks are there in all.



6

12

18

24

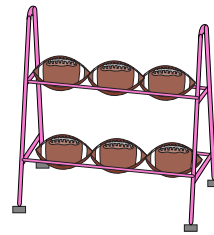
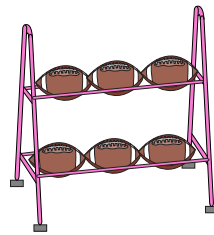
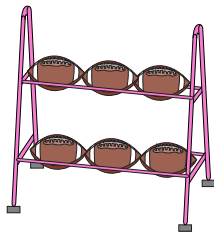
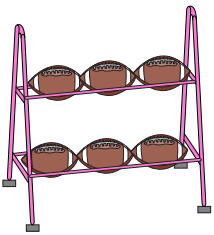
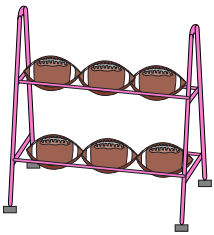
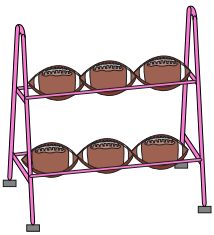
30

36

42

48

2) Count by 6s, and write how many footballs are there in total.



\_\_\_\_\_

\_\_\_\_\_

\_\_\_\_\_

\_\_\_\_\_

\_\_\_\_\_

\_\_\_\_\_

3) Count by 6s, and write how many pearls are there in all.





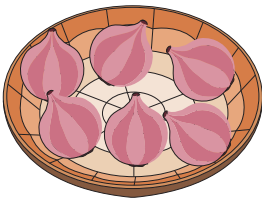


\_\_\_\_\_

\_\_\_\_\_

\_\_\_\_\_

4) Count by 6s, and write how many onions are there in total.



\_\_\_\_\_










\_\_\_\_\_

\_\_\_\_\_

\_\_\_\_\_

\_\_\_\_\_

5) Count by 6s, and write how many flowers are there in all.



\_\_\_\_\_

\_\_\_\_\_

\_\_\_\_\_

\_\_\_\_\_

\_\_\_\_\_

\_\_\_\_\_

\_\_\_\_\_

\_\_\_\_\_

\_\_\_\_\_

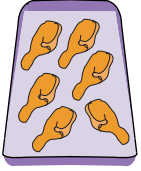
Name : \_\_\_\_\_

## Answer Key

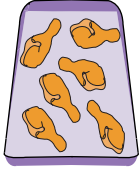
### Skip Counting by 6s

Sheet 1

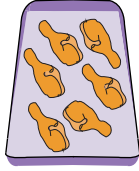
1) Count by 6s, and write how many chicken drumsticks are there in all.



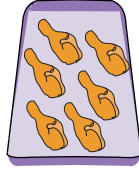
6




12



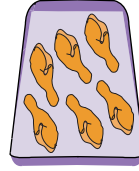
18



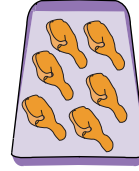
24



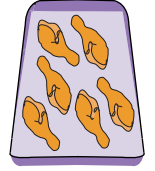
30



36

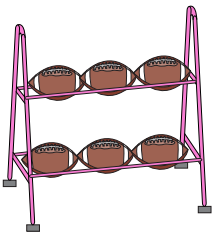


42

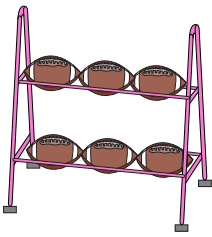


48

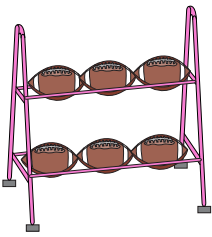
2) Count by 6s, and write how many footballs are there in total.



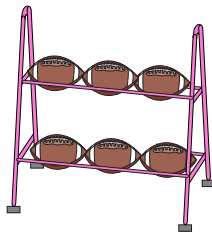
6



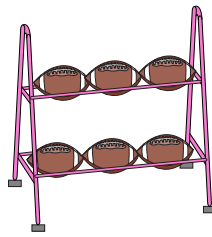
12



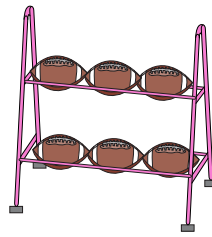
18



24



30



36

3) Count by 6s, and write how many pearls are there in all.



6

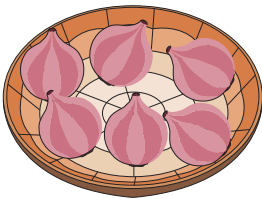


12

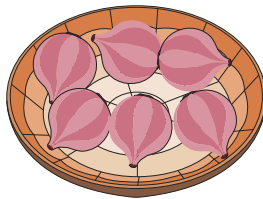


18


4) Count by 6s, and write how many onions are there in total.




6




12



18




24




30


5) Count by 6s, and write how many flowers are there in all.




6




12




18




24




30




36



42



48



54