



Name : _____

Skip Counting by 6s


1) Count by 6s, and write how many cookies are there in total.




6



12

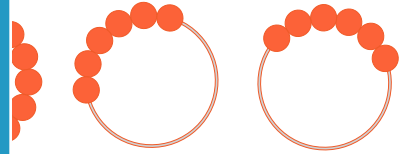



18





24

2) Count by 6s, and write how many beads are there in all.



3) Count by 6s, and write



4) Count by 6s, and write



5) Count by 6s, and write how many cupcakes are there in total.



PREVIEW

Gain complete access to the largest collection of worksheets in all subjects!

Members, please log in to download this worksheet.

Not a member? Please sign up to gain complete access.

www.mathworksheets4kids.com


Name : _____

Answer Key


Sheet 3

Skip Counting by 6s


1) Count by 6s, and write how many cookies are there in total.




6



12



18



24

2) Count by 6s, and write how many beads are there in all.




6



12




42



48


3) Count by 6s, and write




6



12



30



36

4) Count by 6s, and write



6



12

18

24

30

36

42

48

54

5) Count by 6s, and write how many cupcakes are there in total.



6



12



18



24



30



36



42

PREVIEW

Gain complete access to the largest collection of worksheets in all subjects!

Members, please log in to download this worksheet.

Not a member? Please sign up to gain complete access.

www.mathworksheets4kids.com