
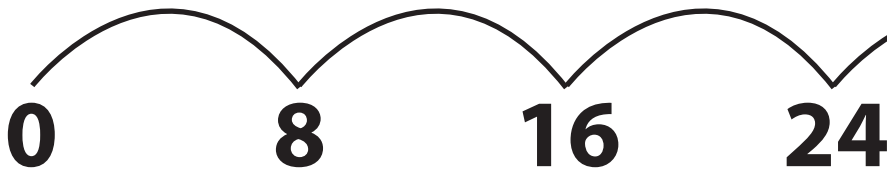


Name : \_\_\_\_\_

# Skip Counting by 8s

Type 2: S1

Count by 8s, and fill in the missing numbers.



1)

248

296

2)

216

3)

200

248

4)

34

5)

216

240

264

272

6)

280

288

296

320

# PREVIEW

Gain complete access to the largest collection of worksheets in all subjects!

Members, please log in to download this worksheet.

Not a member? Please sign up to gain complete access.

[www.mathworksheets4kids.com](http://www.mathworksheets4kids.com)


Name : \_\_\_\_\_

## Answer Key

# Skip Counting by 8s

Type 2: S1

Count by 8s, and fill in the missing numbers.



1)	248	<b>256</b>				296	<b>304</b>	
2)	<b>160</b>	<b>168</b>				<b>208</b>	216	
3)	200	<b>208</b>				248	<b>256</b>	
4)	<b>336</b>	344				<b>384</b>	<b>392</b>	
5)	216	<b>224</b>	<b>232</b>	240	<b>248</b>	<b>256</b>	264	272
6)	<b>272</b>	280	288	296	<b>304</b>	<b>312</b>	320	<b>328</b>

## PREVIEW

Gain complete access to the largest collection of worksheets in all subjects!

Members, please log in to download this worksheet.

Not a member? Please sign up to gain complete access.

[www.mathworksheets4kids.com](http://www.mathworksheets4kids.com)