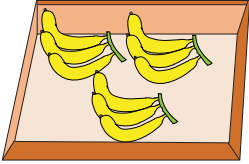


Name : _____

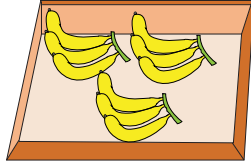
Skip Counting by 9s

Sheet 4

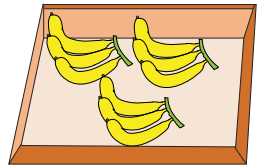
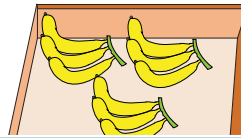
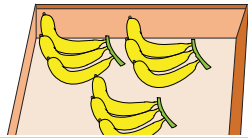
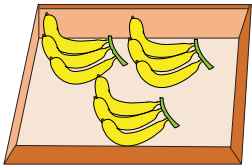
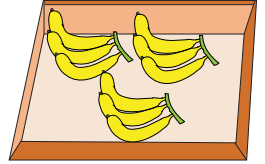
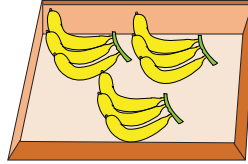
1) Count by 9s, and write how many bananas are there in all.




9



18



2) Count by 9s, and write






PREVIEW
Gain complete access to the largest collection of worksheets in all subjects!

Members, please log in to download this worksheet.

Not a member? Please sign up to gain complete access.

www.mathworksheets4kids.com



3) Count by 9s, and write how many fish are there altogether.

