


Name : \_\_\_\_\_

## Skip Count - 2s to 5s

Sheet 1

1) Count by 2s. How many eggs are there in all?



\_\_\_\_\_ 2 \_\_\_\_\_


\_\_\_\_\_ 4 \_\_\_\_\_

\_\_\_\_\_ 6 \_\_\_\_\_


\_\_\_\_\_ 8 \_\_\_\_\_

\_\_\_\_\_ 10 \_\_\_\_\_

2) Count by 5s. How many doughnuts are there in total?

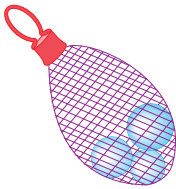


\_\_\_\_\_



\_\_\_\_\_

3) Count by 3s. How many balloons are there in all?



\_\_\_\_\_

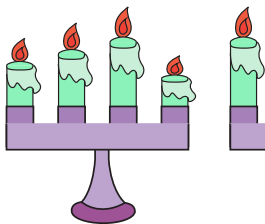
Gain complete access to the largest collection of worksheets in all subjects!

Members, please log in to download this worksheet.

Not a member? Please sign up to gain complete access.

[www.mathworksheets4kids.com](http://www.mathworksheets4kids.com)

4) Count by 4s. How many candles are there in all?



\_\_\_\_\_



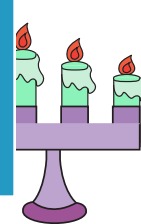
\_\_\_\_\_



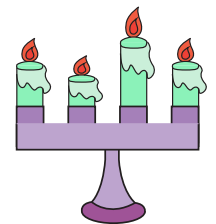
\_\_\_\_\_



\_\_\_\_\_

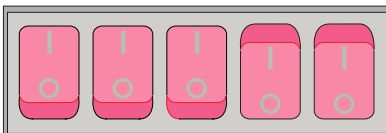


\_\_\_\_\_

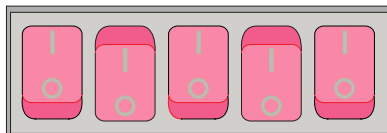


\_\_\_\_\_

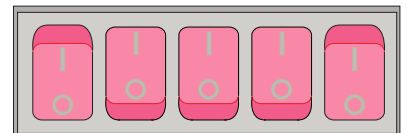
5) Count by 5s. How many switches are there altogether?



\_\_\_\_\_




\_\_\_\_\_





\_\_\_\_\_

## Skip Count - 2s to 5s

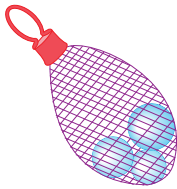
- 1) Count by 2s. How many eggs are there in all?

246810

- 2) Count by 5s. How many doughnuts are there in total?

520

- 3) Count by 3s. How many balloons are there in all?

3

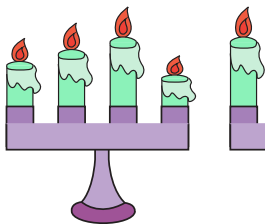
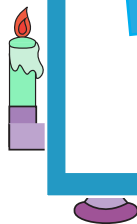
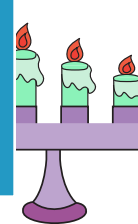
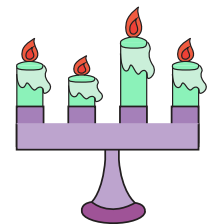
Gain complete access to the largest  
collection of worksheets in all subjects!

Members, please  
log in to  
download this  
worksheet.

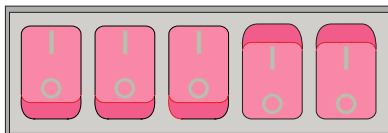
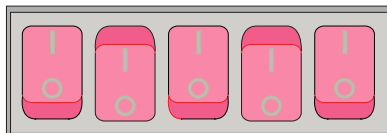
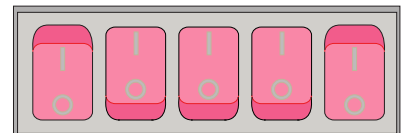
Not a member?  
Please sign up to  
gain complete  
access.

[www.mathworksheets4kids.com](http://www.mathworksheets4kids.com)

- 4) Count by 4s. How many candles are there in all?

4812162024

- 5) Count by 5s. How many switches are there altogether?

51015