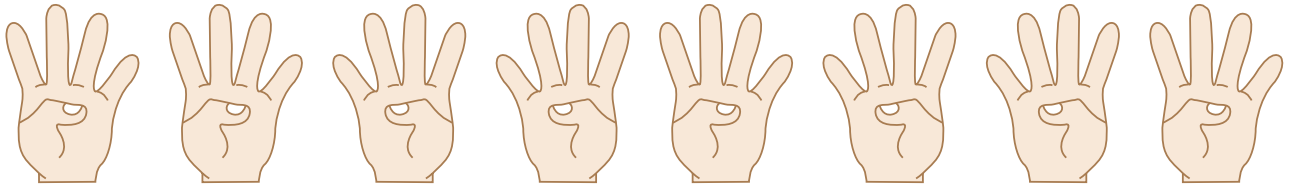


Name : _____

Skip Count - 2s to 5s

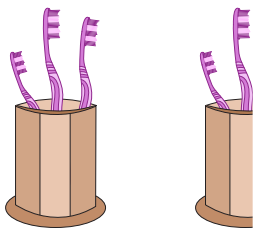
Sheet 3

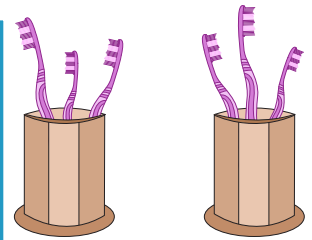
1) Count by 4s. How many fingers are there in total?




4 8 12 16 20 24 28 32


2) Count by 3s. How many toothbrushes are there in all?



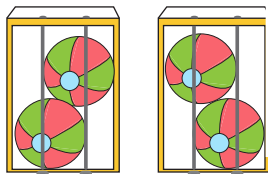


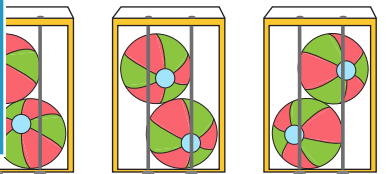
3) Count by 5s. How many bananas are there in all?







4) Count by 2s. How many beach balls are there in all?








5) Count by 4s. How many tomatoes are there in all?











PREVIEW

Gain complete access to the largest collection of worksheets in all subjects!

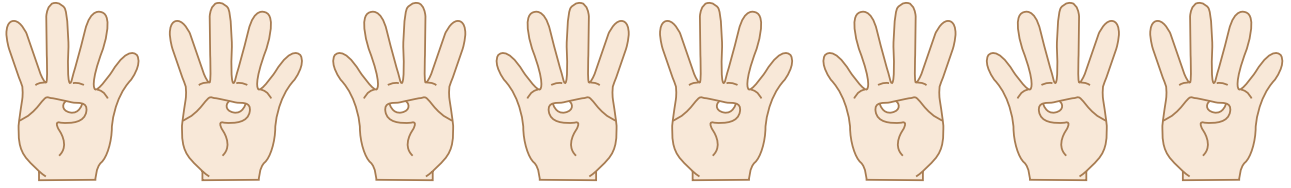
Members, please log in to download this worksheet.

Not a member? Please sign up to gain complete access.

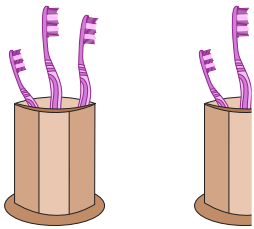
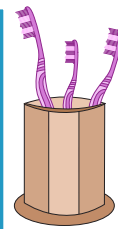
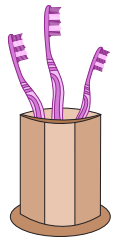
www.mathworksheets4kids.com

Skip Count - 2s to 5s



- 1) Count by 4s. How many fingers are there in total?

48121620242832

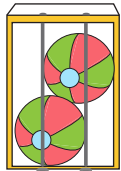
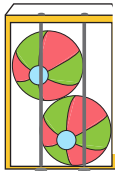
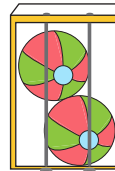
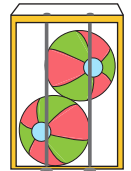
- 2) Count by 3s. How many toothbrushes are there in all?

361821






- 3) Count by 5s. How many bananas are there in all?

525

- 4) Count by 2s. How many beach balls are there in all?

24681012141618

- 5) Count by 4s. How many tomatoes are there in all?

48121620

PREVIEW

Gain complete access to the largest collection of worksheets in all subjects!

Members, please log in to download this worksheet.

Not a member? Please sign up to gain complete access.

www.mathworksheets4kids.com