


Name : _____


Skip Count - 2s to 5s

Sheet 4


1) Count by 2s. How many cherries are there altogether?




_____ 2 _____




_____ 4 _____




_____ 6 _____



_____ 8 _____



_____ 10 _____



_____ 12 _____

2) Count by 4s. How many cups are there in total?



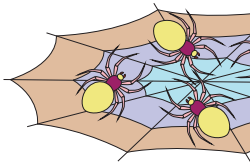


3) Count by 3s. How many balloons are there altogether?

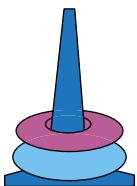


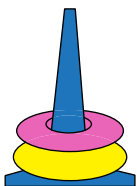


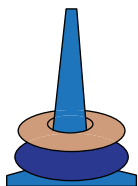
4) Count by 5s. How many spiders are there altogether?

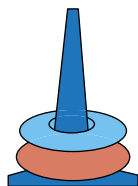


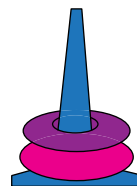
5) Count by 2s. How many rings are there in total?

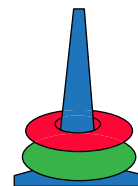


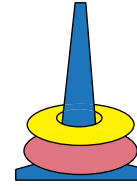












PREVIEW

Gain complete access to the largest collection of worksheets in all subjects!

Members, please log in to download this worksheet.

Not a member? Please sign up to gain complete access.

www.mathworksheets4kids.com


Name : _____

Answer Key


Skip Count - 2s to 5s

Sheet 4


1) Count by 2s. How many cherries are there altogether?




2




4




6



8



10



12

2) Count by 4s. How many cups are there in total?



4



16

3) Count by 3s. How many balloons are there altogether?

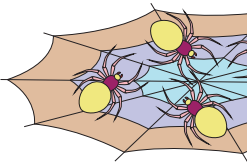


3



15

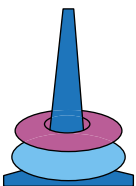
4) Count by 5s. How many spiders are there altogether?



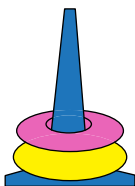
5

10

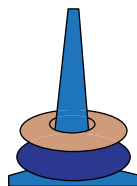
5) Count by 2s. How many rings are there in total?



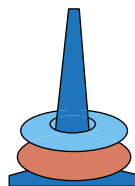
2



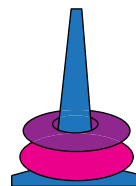
4



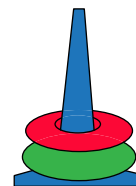
6



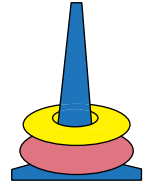
8



10



12



14

PREVIEW

Gain complete access to the largest collection of worksheets in all subjects!

Members, please log in to download this worksheet.

Not a member? Please sign up to gain complete access.

www.mathworksheets4kids.com