


Name : _____

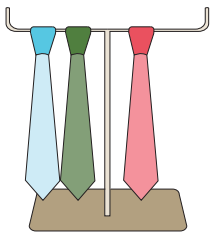
Skip Count - 2s to 5s

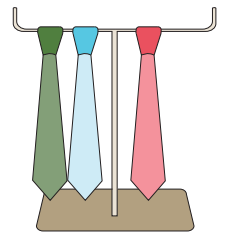
Sheet 5

1) Count by 5s. How many candies are there in total?




2) Count by 3s. How many neckties are there altogether?






3) Count by 2s. How



4) Count by 3s. How



PREVIEW

Gain complete access to the largest collection of worksheets in all subjects!

Members, please log in to download this worksheet.

Not a member? Please sign up to gain complete access.

www.mathworksheets4kids.com

5) Count by 4s. How many mushrooms are there in all?






Name : _____

Answer Key

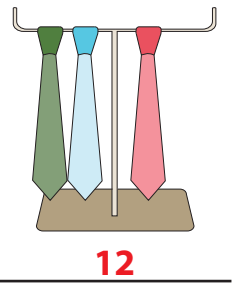
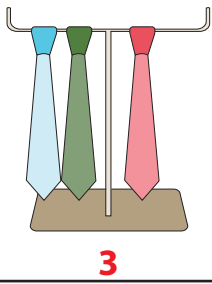
Skip Count - 2s to 5s

Sheet 5


- 1) Count by 5s. How many candies are there in total?




- 2) Count by 3s. How many neckties are there altogether?



- 3) Count by 2s. How



- 4) Count by 3s. How



3

6

9

- 5) Count by 4s. How many mushrooms are there in all?



4



8

PREVIEW

Gain complete access to the largest collection of worksheets in all subjects!

Members, please log in to download this worksheet.

Not a member? Please sign up to gain complete access.

www.mathworksheets4kids.com