

Name : _____

Skip Count - 6s to 12s

1) Count by 6s. How many books are there in all?



6



12



2) Count by 12s. How many mugs are there in all?



PREVIEW

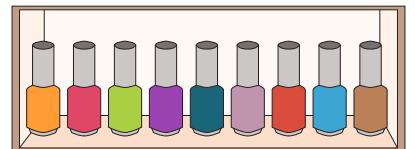

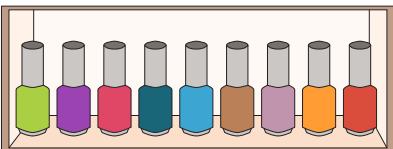
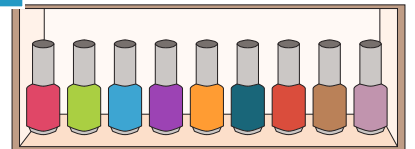
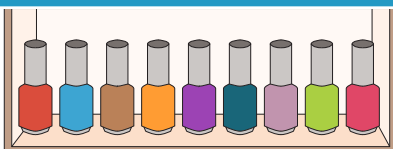

Gain complete access to the largest collection of worksheets in all subjects!

Members, please log in to download this worksheet.

Not a member? Please sign up to gain complete access.

www.mathworksheets4kids.com

3) Count by 9s. How many test tubes are there in all?



Name : _____

Answer Key

Skip Count - 6s to 12s

Sheet 1

1) Count by 6s. How many books are there in all?




6




12



18




24



30



36



60

2) Count by 12s. How many mugs are there in all?



12



60

PREVIEW
Gain complete access to the largest collection of worksheets in all subjects!

Members, please log in to download this worksheet.

Not a member? Please sign up to gain complete access.

www.mathworksheets4kids.com

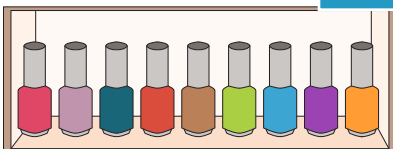


48

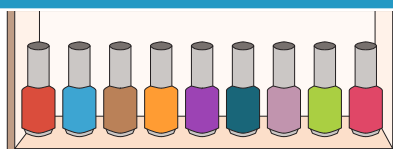


96

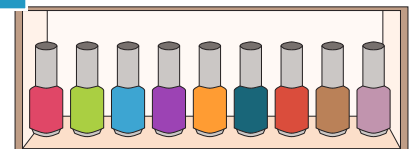
3) Count by 9s. How many bottles are there in all?



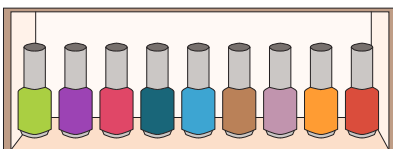
9



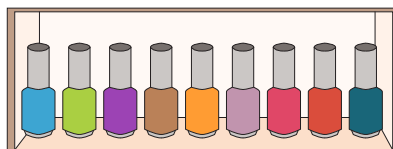
18



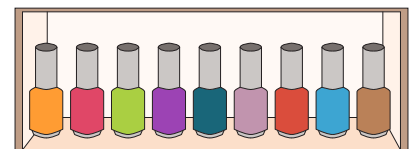
27



36



45



54