

Name : _____

Skip Count - 6s to 12s


1) Count by 7s. How many Christmas lights are there in all?



_____ 7 _____



2) Count by 10s. How many jars are there in all?




Gain complete access to the largest collection of worksheets in all subjects!

Members, please log in to download this worksheet.

Not a member? Please sign up to gain complete access.

www.mathworksheets4kids.com



3) Count by 6s. How many trophies are there in all?









Skip Count - 6s to 12s

1) Count by 7s. How many Christmas lights are there in all?




7



28

2) Count by 10s. How many jars are there in all?




10

Gain complete access to the largest collection of worksheets in all subjects!

Members, please log in to download this worksheet.

Not a member? Please sign up to gain complete access.

www.mathworksheets4kids.com



30

3) Count by 6s. How many trophies are there in all?



6



18



24



30