






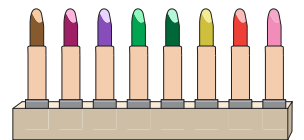
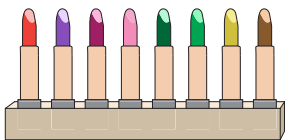
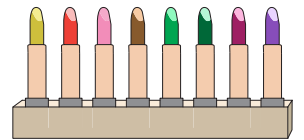
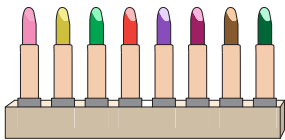
Skip Count - 6s to 12s

1) Count by 11s. How many flowers are there in total?








11

2) Count by 8s. How many _____



3) Count by 12s. How many _____



PREVIEW

Gain complete access to the largest collection of worksheets in all subjects!


Members, please log in to download this worksheet.

Not a member? Please sign up to gain complete access.





www.mathworksheets4kids.com

Skip Count - 6s to 12s

1) Count by 11s. How many flowers are there in total?

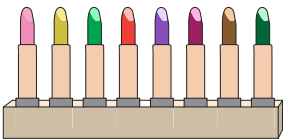


11

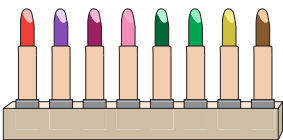


55

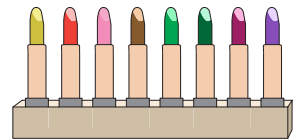
2) Count by 8s. How many markers are there in total?



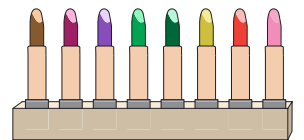
8



40




32



64

3) Count by 12s. How many candies are there in total?




12




24




36




48



60



72



84

PREVIEW

Gain complete access to the largest collection of worksheets in all subjects!

Members, please log in to download this worksheet.

Not a member? Please sign up to gain complete access.

www.mathworksheets4kids.com