

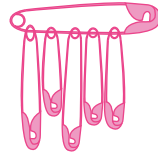
Name : \_\_\_\_\_

# Skip Count - 6s to 12s

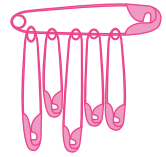
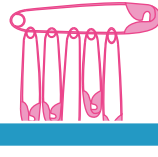
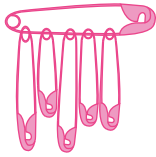
1) Count by 6s. How many safety pins are there altogether?




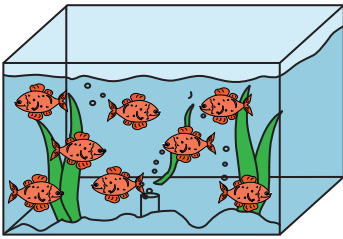
6



12



2) Count by 8s. How many fish are there altogether?



# PREVIEW





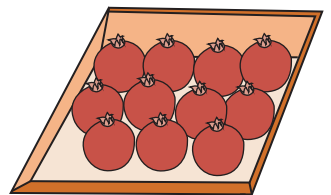
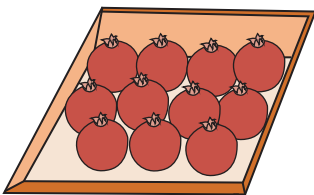
Gain complete access to the largest collection of worksheets in all subjects!

Members, please log in to download this worksheet.

Not a member? Please sign up to gain complete access.

[www.mathworksheets4kids.com](http://www.mathworksheets4kids.com)

3) Count by 11s. How many tomatoes are there altogether?



**Skip Count - 6s to 12s**

1) Count by 6s. How many safety pins are there altogether?



**6**



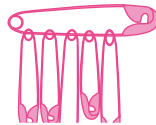
**12**



**18**

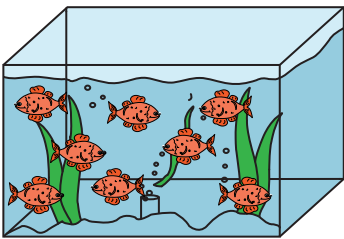


**24**

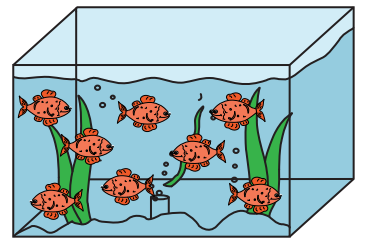


**36**

2) Count by 8s. How many fish are there altogether?




**8**



**32**

3) Count by 11s. How many tomatoes are there altogether?




**11**


**22**

**33**


**44**




**55**



**66**



**77**



**88**

**PREVIEW**

Gain complete access to the largest collection of worksheets in all subjects!

Members, please log in to download this worksheet.

Not a member? Please sign up to gain complete access.

[www.mathworksheets4kids.com](http://www.mathworksheets4kids.com)