

Name : _____

Skip Count - 2s to 10s



Sheet 2

Skip count to fill in the missing numbers.

1



2



PREVIEW



Gain complete access to the largest collection of worksheets in all subjects!

Members, please log in to download this worksheet.



Not a member? Please sign up to gain complete access.

www.mathworksheets4kids.com

3



4



5



Name : _____

Answer Key

Skip Count - 2s to 10s


Sheet 2

Skip count to fill in the missing numbers.

1



2




PREVIEW

Gain complete access to the largest collection of worksheets in all subjects!



Members, please log in to download this worksheet.

Not a member? Please sign up to gain complete access.



www.mathworksheets4kids.com



3



4



5

