

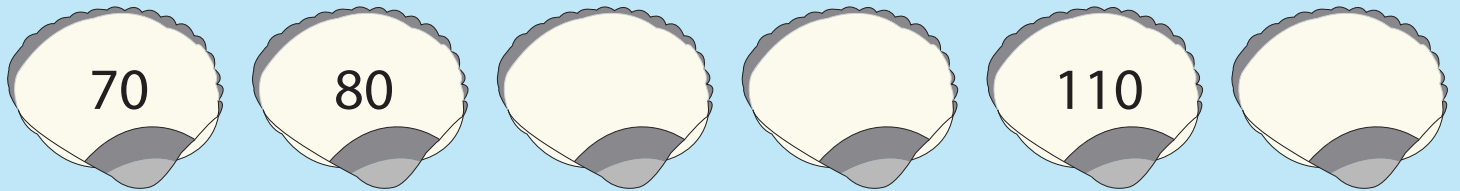
Name : \_\_\_\_\_

## Skip Count - 2s to 10s

Sheet 3

Skip count to fill in the missing numbers.

1)



2)



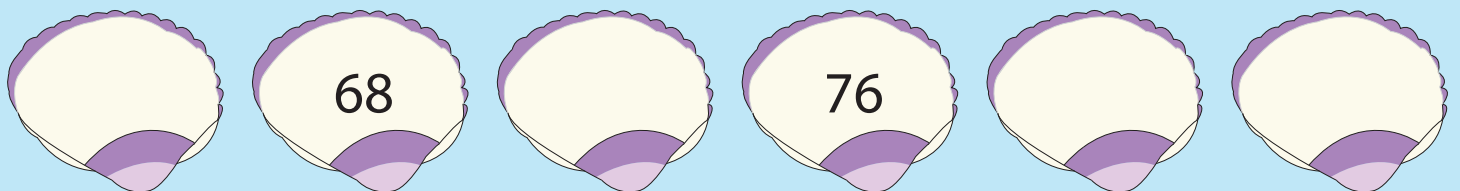
3)



4)



5)



**PREVIEW**

Gain complete access to the largest collection of worksheets in all subjects!

Members, please log in to download this worksheet.

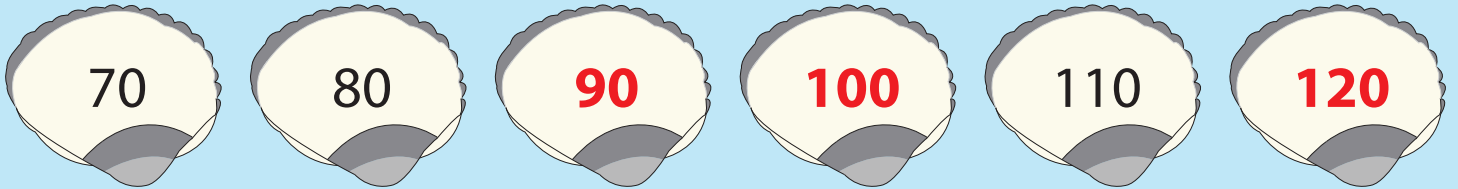
Not a member? Please sign up to gain complete access.

[www.mathworksheets4kids.com](http://www.mathworksheets4kids.com)

**Skip Count - 2s to 10s**

Skip count to fill in the missing numbers.

1)



2)



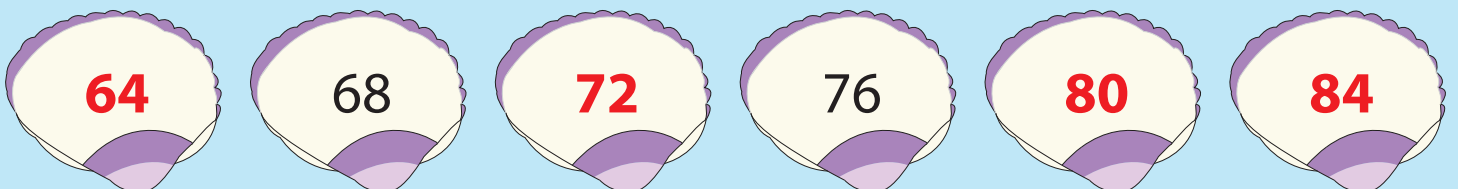
3)



4)



5)



**PREVIEW**

Gain complete access to the largest collection of worksheets in all subjects!

Members, please log in to download this worksheet.

Not a member? Please sign up to gain complete access.

[www.mathworksheets4kids.com](http://www.mathworksheets4kids.com)